

Part of

**BEAT
THAT!**



Welsh Language

Big Maths

The **SAFE** Challenges!

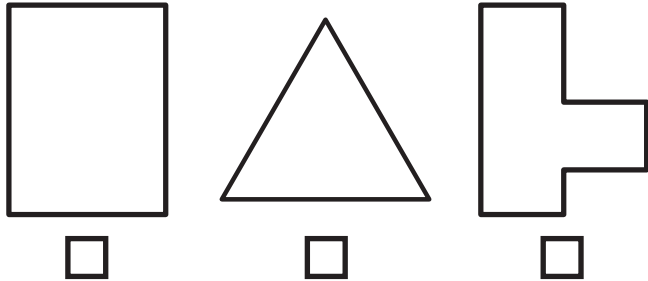
Thank you to Ysgol Gymraeg Treganna, Ysgol Gymraeg Glan Ceubal and Ysgol Morfa Rhianedd for their generous help in translating the SAFE Challenges to Welsh.



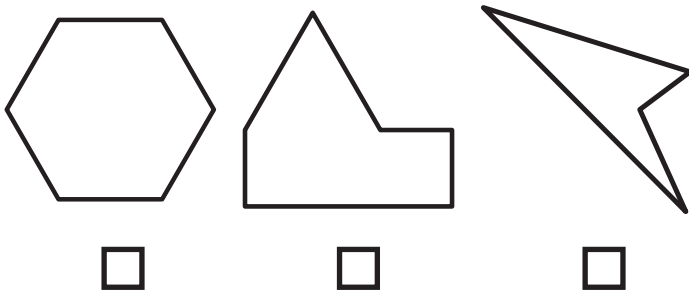
Big Maths Beat That!: Teacher Notes

SAFE Challenge 11			
	Step Location in the SAFE framework		Title of Step
	Progress Drive	Step No.	
Q1	Shape: Explore & Draw	19	I use my knowledge of symmetry to recognise non-symmetrical shapes
Q2	Shape: 2D Shapes	18	I can identify regular and irregular polygons
Q3	Amounts: Amounts of Distance	12	I know my metre Learn It: 1m = 100cm
Q4	Amounts: Amounts of Distance	13	I know my millimetre Learn It: 1cm = 10mm
Q5	Amounts: Amounts of Mass	12	I know my mass Learn It: 1kg = 1000g
Q6	Amounts: Amounts of Space	12	I know my capacity Learn It: 1L = 1000ml
Q7	Amounts: Amounts of Turn	11	I can recognise acute angles
		12	I can recognise obtuse angles
Q8	Fractions: Fractions: Counting	8	I can record my tenths with decimals too
Q9	Explaining Data: Diagrams & Tables	18	I can use a variety of Venn Diagrams
Q10	Explaining Data: Bar Charts	5	I can explain a 1:2 scale bar chart

1 Ticiwch y siâp sydd ddim yn gymesur



2 Pa siâp sy'n siâp rheolaidd



3 $1\text{m} = \underline{\hspace{2cm}} \text{cm}$

$\frac{1}{4} \text{m} = \underline{\hspace{2cm}} \text{cm}$

4 $10\text{mm} = \underline{\hspace{2cm}} \text{cm}$

$40\text{mm} = \underline{\hspace{2cm}} \text{cm}$

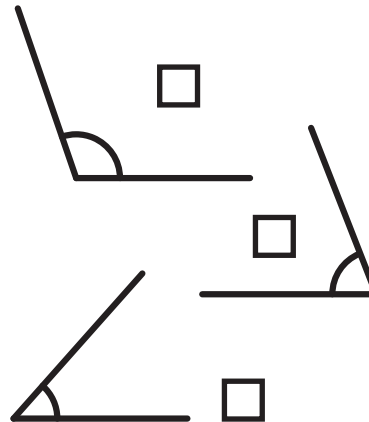
5 $1\text{kg} = \underline{\hspace{2cm}} \text{g}$

$\frac{1}{2} \text{kg} = \underline{\hspace{2cm}} \text{g}$

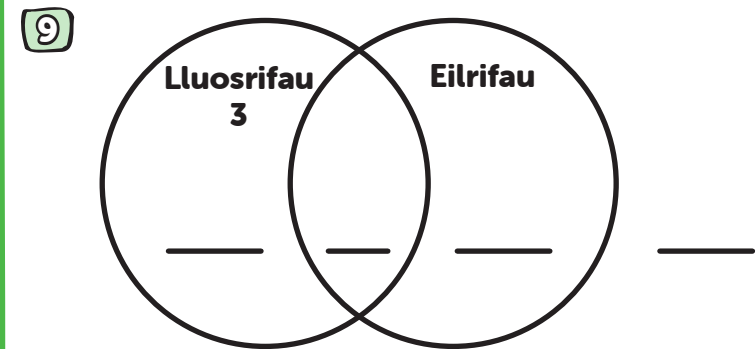
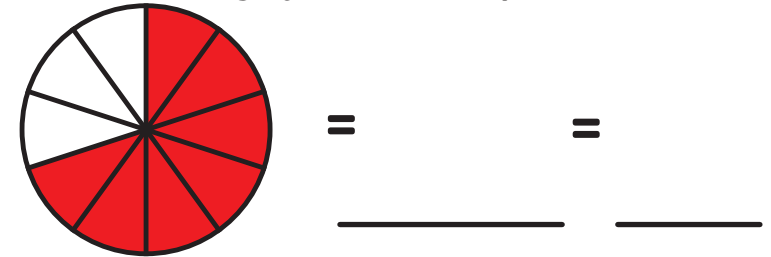
6 $1000\text{ml} = \underline{\hspace{2cm}} \text{L}$

$6000\text{ml} = \underline{\hspace{2cm}} \text{L}$

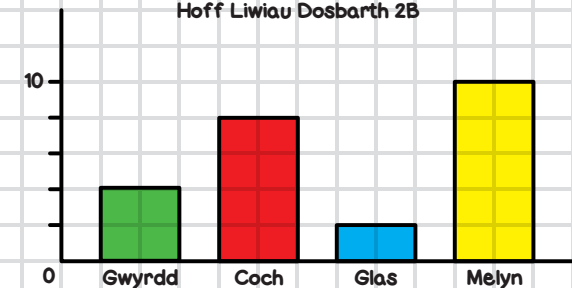
7 Ticiwch yr ongl aflem



8 Ysgrifennwch y ffracsiwn sydd wedi'i liwio fel degolyn a ffracsiwn pendrwm



10 Hoff Liwiau Dosbarth 2B



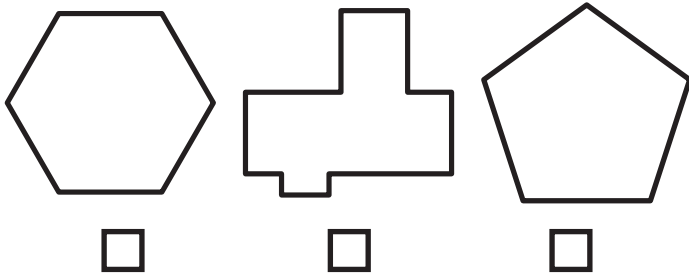
Sawl plentyn ddewisiodd coch?

FY SGÔR DDIWETHAF?!

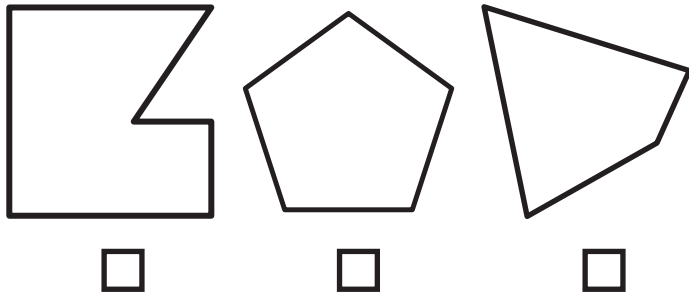
YDW I WEDI EI GURO?!



1 Ticiwch y siâp sydd ddim yn gymesur



2 Pa siâp sy'n siâp rheolaidd



3 $1\text{m} = \underline{\hspace{2cm}} \text{cm}$

$\frac{3}{4} \text{m} = \underline{\hspace{2cm}} \text{cm}$

4 $1\text{cm} = \underline{\hspace{2cm}} \text{mm}$

$\frac{1}{2} \text{cm} = \underline{\hspace{2cm}} \text{mm}$


5 $1\text{kg} = \underline{\hspace{2cm}} \text{g}$

$\frac{1}{4} \text{kg} = \underline{\hspace{2cm}} \text{g}$

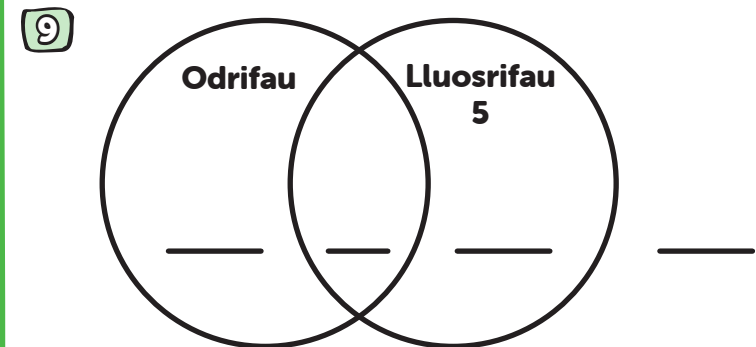
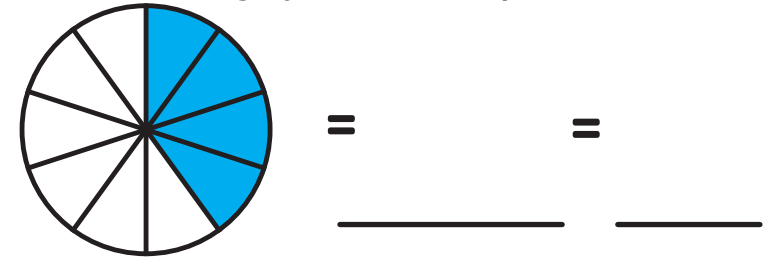
6 $1000\text{ml} = \underline{\hspace{2cm}} \text{L}$

$\frac{1}{2} \text{L} = \underline{\hspace{2cm}} \text{ml}$

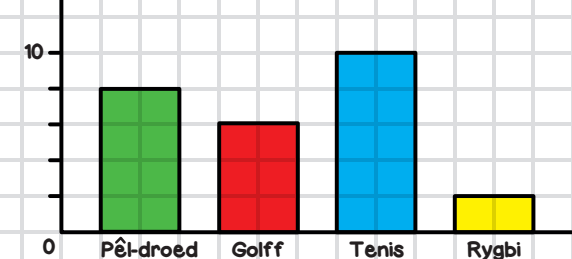
7 Ticiwch yr ongl aflem



8 Ysgrifennwch y ffracsiwn sydd wedi'i liwio fel degolyn a ffracsiwn pendrwm



10 Hoff Gamp Dosbarth 3A



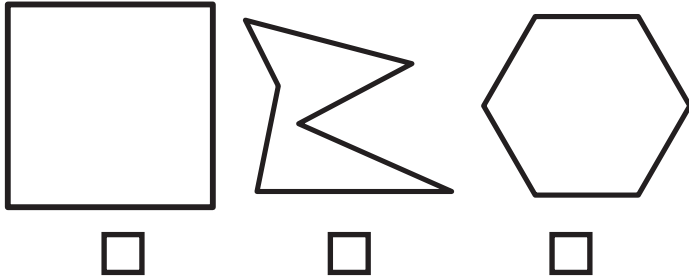
Faint sy'n chwarae golff?

FY SGÔR DDIWETHAF?!


YDW I WEDI EI GURO?!



1 Ticiwch y siâp sydd ddim yn gymesur



2 Pa siâp sy'n siâp rheolaidd



3 $100\text{cm} = \underline{\quad} \text{m}$

$300\text{cm} = \underline{\quad} \text{m}$

4 $1\text{cm} = \underline{\quad} \text{mm}$

$30\text{mm} = \underline{\quad} \text{cm}$

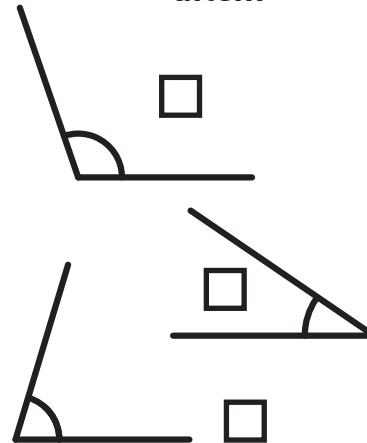
5 $1\text{kg} = \underline{\quad} \text{g}$

$3000\text{g} = \underline{\quad} \text{kg}$

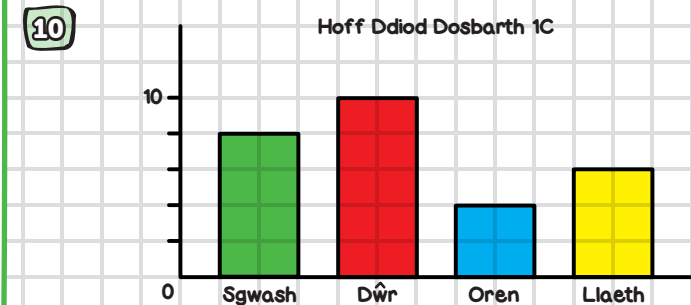
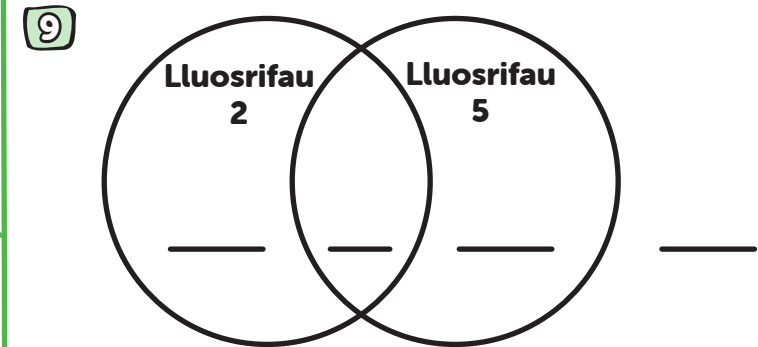
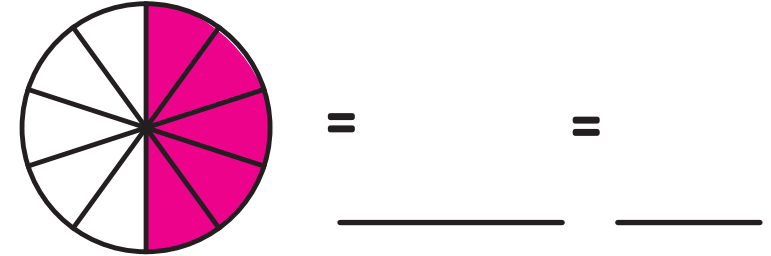
6 $1000\text{ml} = \underline{\quad} \text{L}$

$\frac{3}{4} \text{L} = \underline{\quad} \text{ml}$

7 Ticiwch yr ongl aflem



8 Ysgrifennwch y ffracsiwn sydd wedi'i liwio fel degolyn a ffracsiwn pendrwm



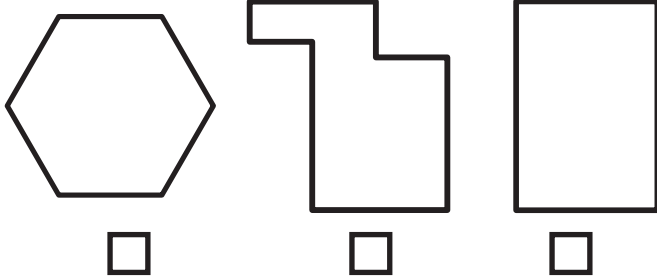
Faint sy'n yfed llaeth?

FY SGÔR DDIWETHAF?!

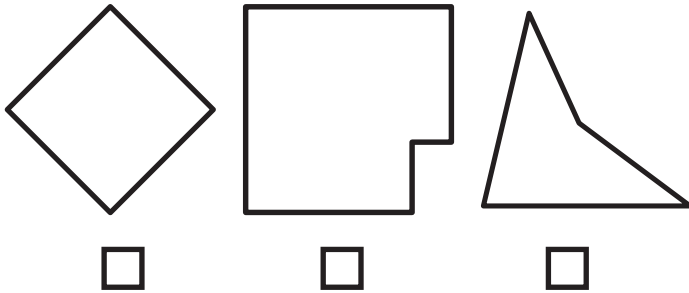
YDW I WEDI EI GURO?!



1 Ticiwch y siâp sydd ddim yn gymesur



2 Pa siâp sy'n siâp rheolaidd



3 $100\text{cm} = \underline{\quad} \text{m}$

$\frac{1}{2} \text{m} = \underline{\quad} \text{cm}$

4 $1\text{cm} = \underline{\quad} \text{mm}$

$50\text{mm} = \underline{\quad} \text{cm}$

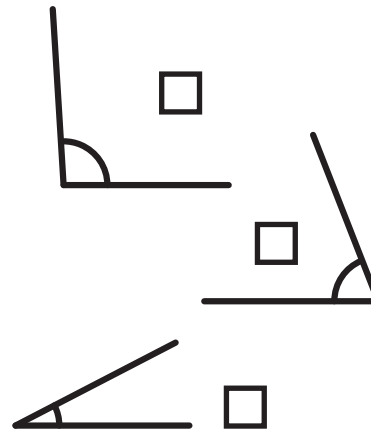
5 $1000\text{g} = \underline{\quad} \text{kg}$

$4\text{kg} = \underline{\quad} \text{g}$

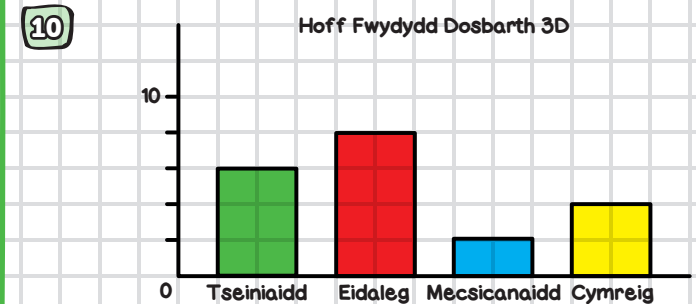
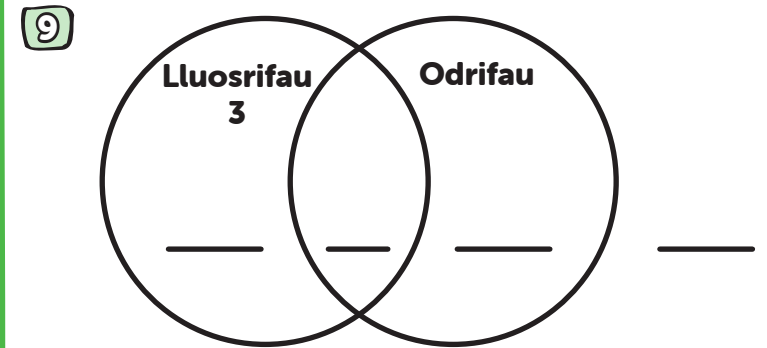
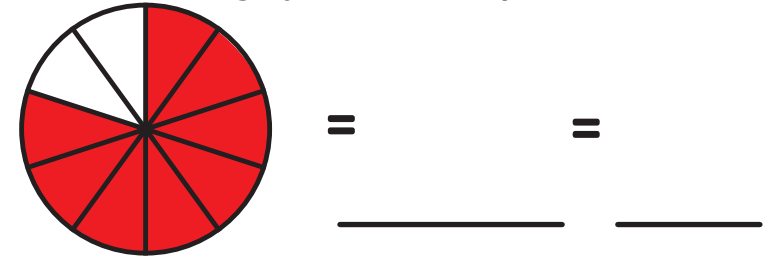
6 $1000\text{ml} = \underline{\quad} \text{L}$

$5000\text{ml} = \underline{\quad} \text{L}$

7 Ticiwch yr ongl aflem



8 Ysgrifennwch y ffracsiwn sydd wedi'i liwio fel degolyn a ffracsiwn pendrwm



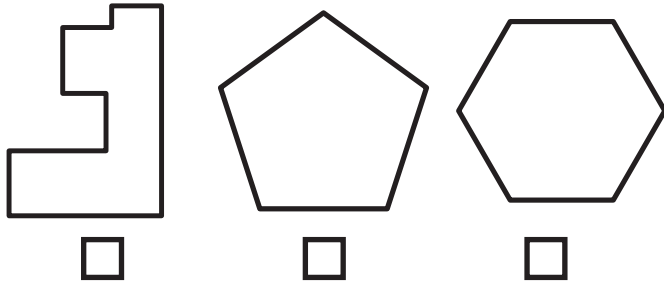
Faint sy'n hoffi bwyd Eidaleg?

FY SGÔR DDIWETHAF?!

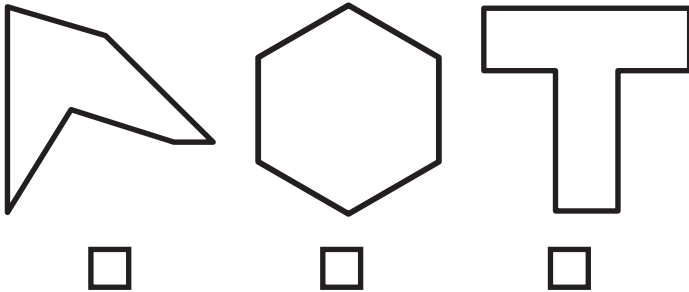
YDW I WEDI EI GURO?!



1 Ticiwch y siâp sydd ddim yn gymesur



2 Pa siâp sy'n siâp rheolaidd



3 $100\text{cm} = \underline{\quad} \text{m}$

$\frac{3}{4} \text{m} = \underline{\quad} \text{cm}$

4 $1\text{cm} = \underline{\quad} \text{mm}$

$20\text{mm} = \underline{\quad} \text{cm}$

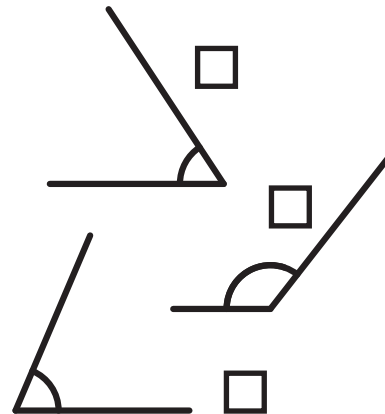
5 $1\text{kg} = \underline{\quad} \text{g}$

$\frac{3}{4} \text{kg} = \underline{\quad} \text{g}$

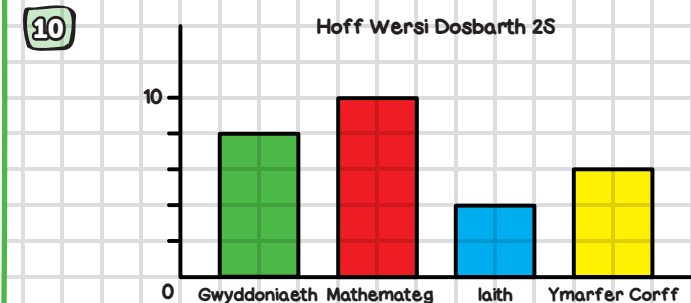
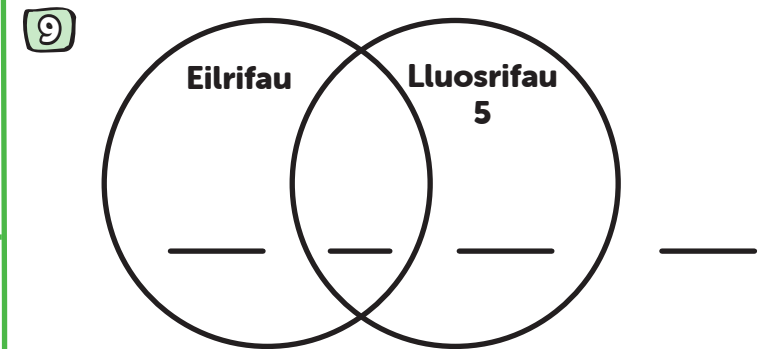
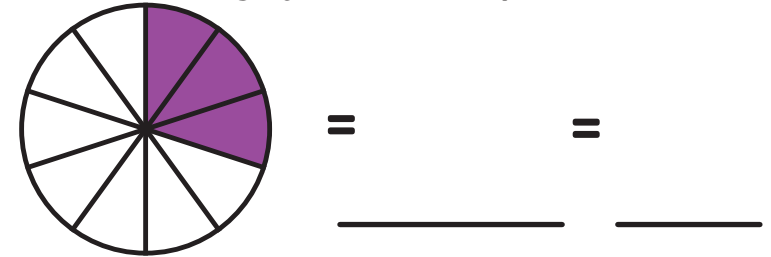
6 $1000\text{ml} = \underline{\quad} \text{L}$

$2000\text{ml} = \underline{\quad} \text{L}$

7 Ticiwch yr ongl aflem



8 Ysgrifennwch y ffracsiwn sydd wedi'i liwio fel degolyn a ffracsiwn pendrwm



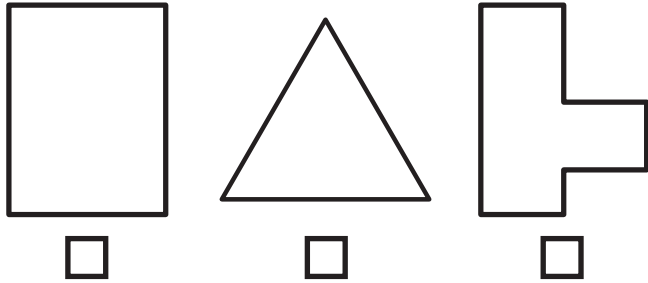
Faint sy'n hoffi Mathemateg?

FY SGÔR DDIWETHAF?!

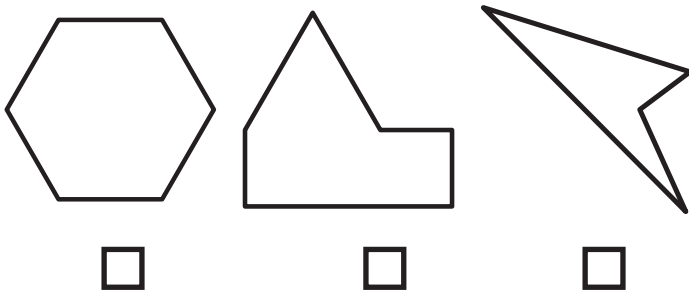
YDW I WEDI EI GURO?!



1 Ticiwch y siâp sydd ddim yn gymesur



2 Pa siâp sy'n siâp rheolaidd



3 $1\text{m} = \underline{\hspace{2cm}} \text{cm}$

$3\text{m} = \underline{\hspace{2cm}} \text{cm}$

4 $10\text{mm} = \underline{\hspace{2cm}} \text{cm}$

$70\text{mm} = \underline{\hspace{2cm}} \text{cm}$

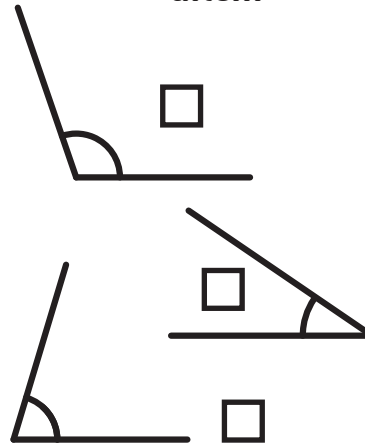
5 $1\text{kg} = \underline{\hspace{2cm}} \text{g}$

$\frac{1}{2} \text{kg} = \underline{\hspace{2cm}} \text{g}$

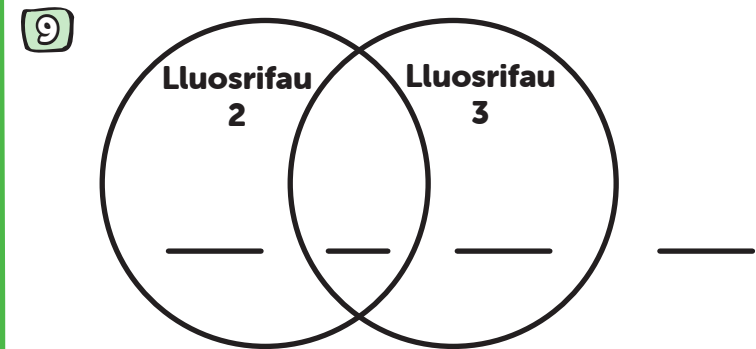
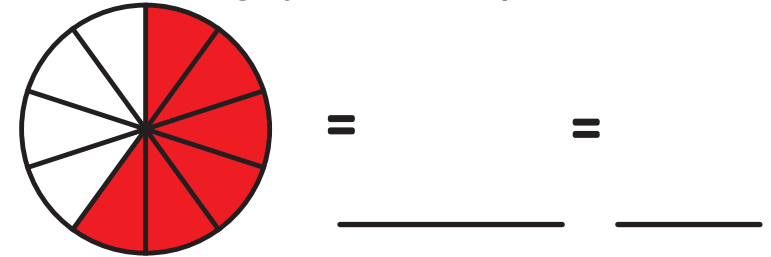
6 $1000\text{ml} = \underline{\hspace{2cm}} \text{L}$

$\frac{1}{4} \text{L} = \underline{\hspace{2cm}} \text{ml}$

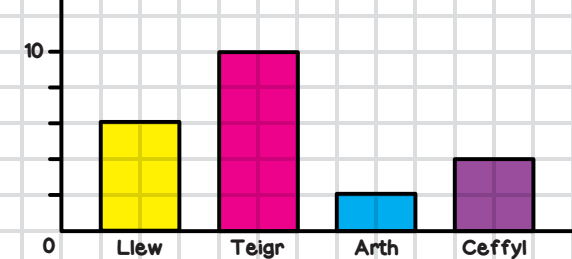
7 Ticiwch yr ongl aflem



8 Ysgrifennwch y ffracsiwn sydd wedi'i liwio fel degolyn a ffracsiwn pendrwm



10 Hoff Anifeiliaid Dosbarth 4A



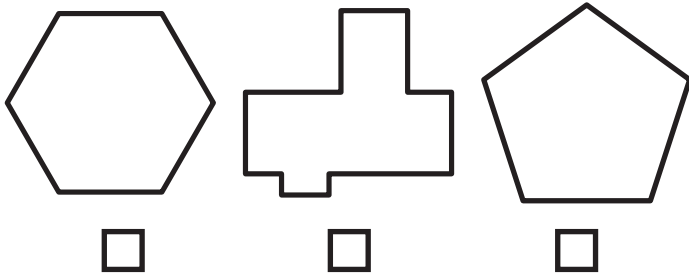
Faint sy'n hoffi Llewod?

FY SGÔR DDIWETHAF?!

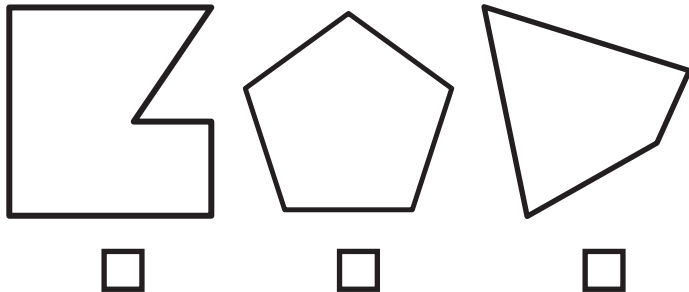
YDW I WEDI EI GURO?!



1 Ticiwch y siâp sydd ddim yn gymesur



2 Pa siâp sy'n siâp rheolaidd



3 $1\text{m} = \underline{\hspace{2cm}} \text{cm}$

$200\text{cm} = \underline{\hspace{2cm}} \text{m}$

4 $1\text{cm} = \underline{\hspace{2cm}} \text{mm}$

$40\text{mm} = \underline{\hspace{2cm}} \text{cm}$

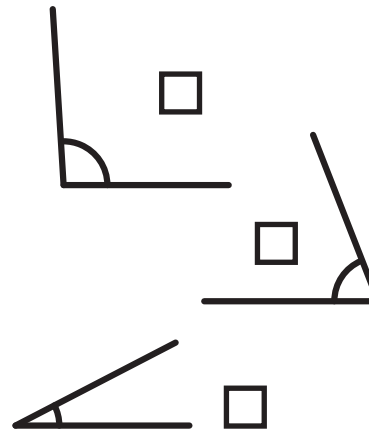
5 $1\text{kg} = \underline{\hspace{2cm}} \text{g}$

$\frac{3}{4}\text{kg} = \underline{\hspace{2cm}} \text{g}$

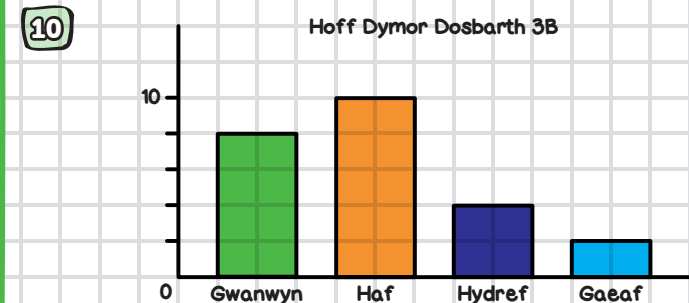
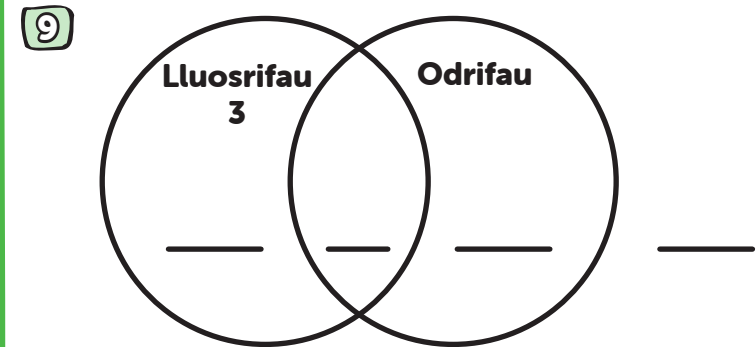
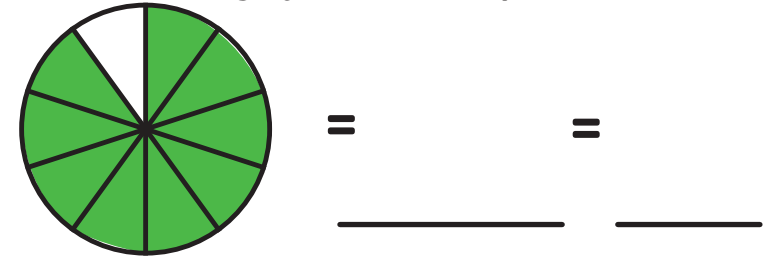
6 $1\text{L} = \underline{\hspace{2cm}} \text{ml}$

$4\text{L} = \underline{\hspace{2cm}} \text{ml}$

7 Ticiwch yr ongl aflem



8 Ysgrifennwch y ffracsiwn sydd wedi'i liwio fel degolyn a ffracsiwn pendrwm



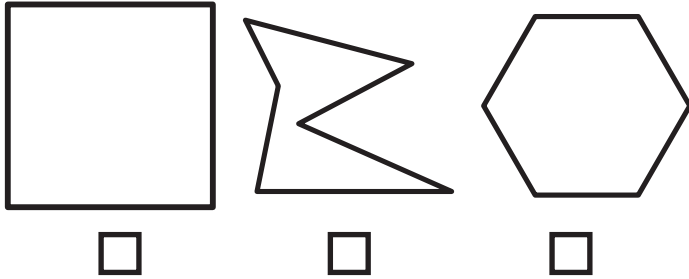
Faint sy'n hoffi'r Gwanwyn?

FY SGÔR DDIWETHAF?!


YDW I WEDI EI GURO?!



1 Ticiwch y siâp sydd ddim yn gymesur



2 Pa siâp sy'n siâp rheolaidd



3 $1\text{m} = \underline{\hspace{2cm}} \text{cm}$

$\frac{1}{4} \text{kg} = \underline{\hspace{2cm}} \text{g}$

4 $1\text{cm} = \underline{\hspace{2cm}} \text{mm}$

$60\text{mm} = \underline{\hspace{2cm}} \text{cm}$

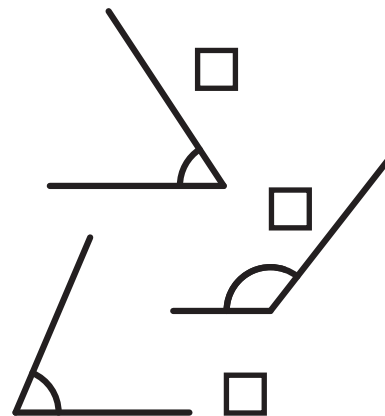
5 $1\text{kg} = \underline{\hspace{2cm}} \text{g}$

$5\text{kg} = \underline{\hspace{2cm}} \text{g}$

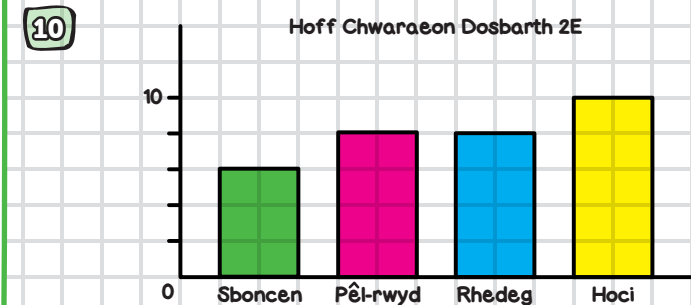
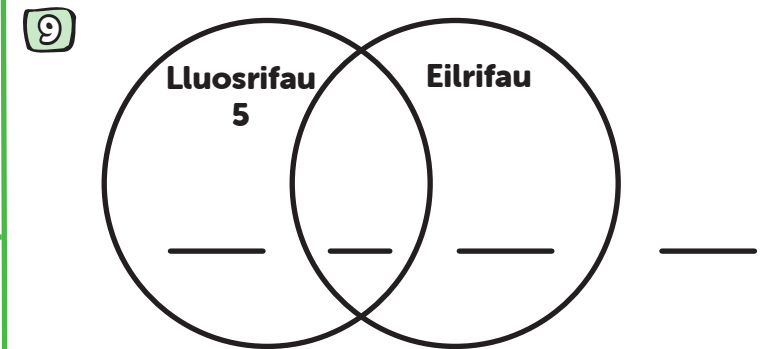
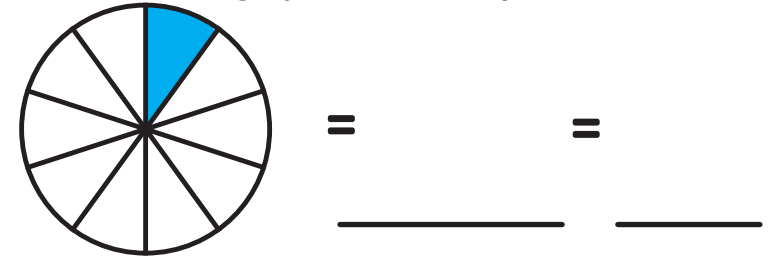
6 $1000\text{ml} = \underline{\hspace{2cm}} \text{L}$

$4\text{L} = \underline{\hspace{2cm}} \text{ml}$

7 Ticiwch yr ongl aflem



8 Ysgrifennwch y ffracsiwn sydd wedi'i liwio fel degolyn a ffracsiwn pendrwm



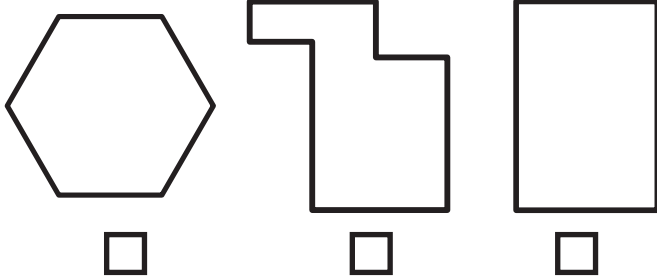
Faint sy'n hoffi sboncen?

FY SGÔR DDIWETHAF?!

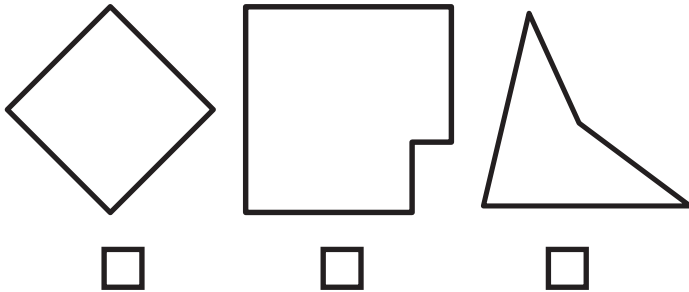
YDW I WEDI EI GURO?!



1 Ticiwch y siâp sydd ddim yn gymesur



2 Pa siâp sy'n siâp rheolaidd



3 $100\text{cm} = \underline{\hspace{2cm}} \text{m}$

$\frac{3}{4} \text{kg} = \underline{\hspace{2cm}} \text{g}$

4 $10\text{mm} = \underline{\hspace{2cm}} \text{cm}$

$\frac{1}{2} \text{cm} = \underline{\hspace{2cm}} \text{mm}$

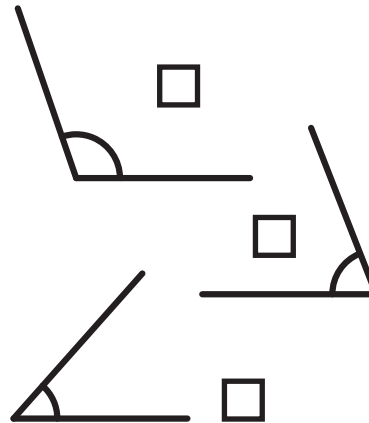
5 $1000\text{g} = \underline{\hspace{2cm}} \text{kg}$

$3\text{kg} = \underline{\hspace{2cm}} \text{g}$

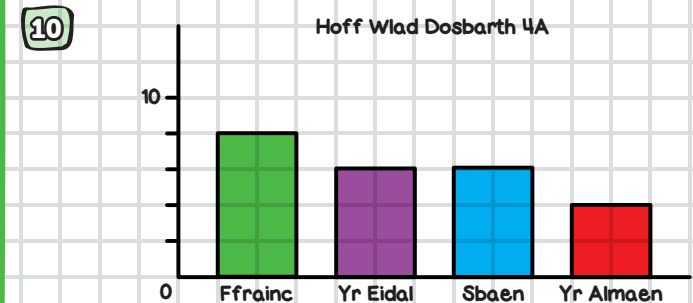
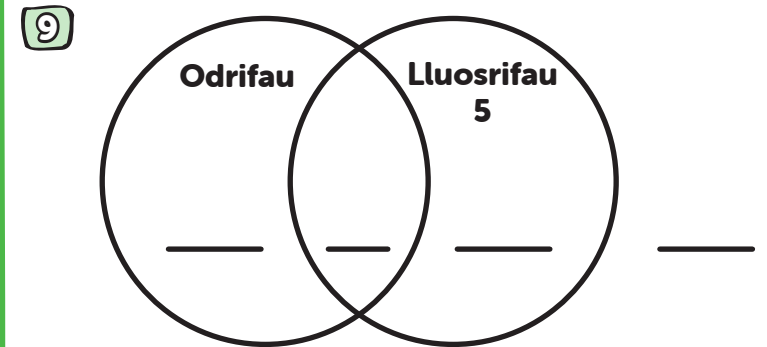
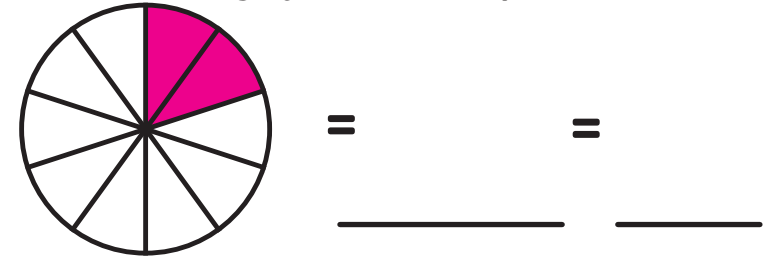
6 $1\text{L} = \underline{\hspace{2cm}} \text{ml}$

$6000\text{ml} = \underline{\hspace{2cm}} \text{L}$

7 Ticiwch yr ongl aflem



8 Ysgrifennwch y ffracsiwn sydd wedi'i liwio fel degolyn a ffracsiwn pendrwm



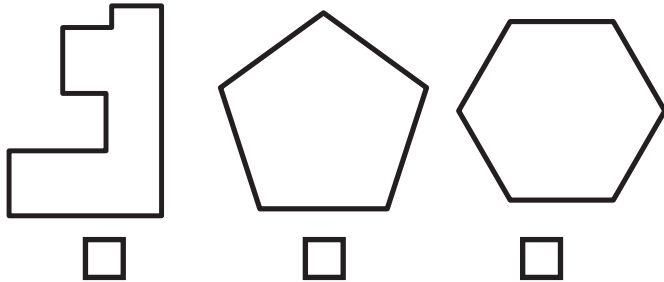
Faint sy'n hoffi'r Almaen?

FY SGÔR DDIWETHAF?!

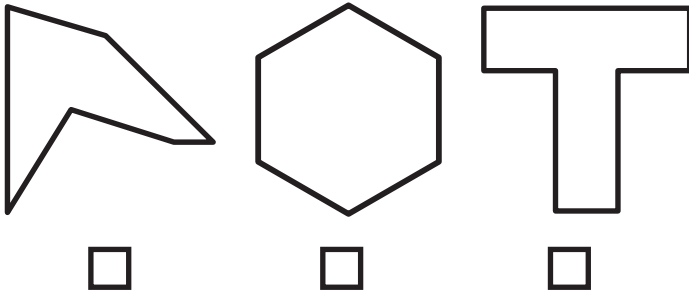
YDW I WEDI EI GURO?!



1 Ticiwch y siâp sydd ddim yn gymesur



2 Pa siâp sy'n siâp rheolaidd



3 $1\text{m} = \underline{\hspace{2cm}} \text{cm}$

$700\text{cm} = \underline{\hspace{2cm}} \text{m}$

4 $1\text{cm} = \underline{\hspace{2cm}} \text{mm}$

$90\text{mm} = \underline{\hspace{2cm}} \text{cm}$


5 $1000\text{g} = \underline{\hspace{2cm}} \text{kg}$

$4\text{kg} = \underline{\hspace{2cm}} \text{g}$

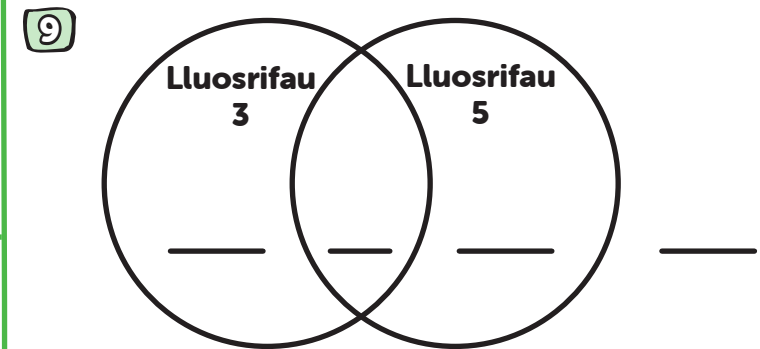
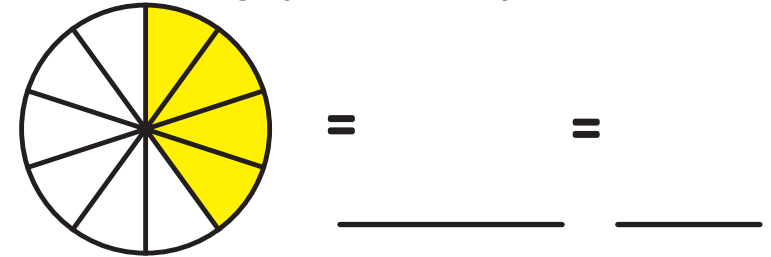
6 $1\text{L} = \underline{\hspace{2cm}} \text{ml}$

$3000\text{ml} = \underline{\hspace{2cm}} \text{L}$

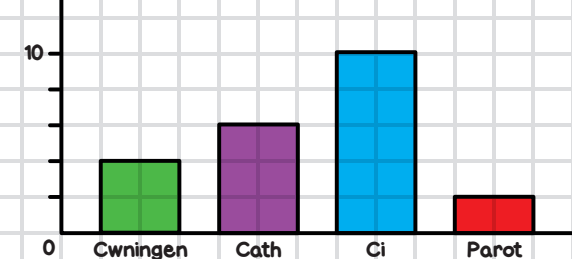
7 Ticiwch yr ongl aflem



8 Ysgrifennwch y ffracsiwn sydd wedi'i liwio fel degolyn a ffracsiwn pendrwm



10 Hoff Anifeiliaid Anwes Dosbarth 1C



Faint sy'n hoffi cathod?

FY SGÔR DDIWETHAF?

YDW I WEDI EI GURO?



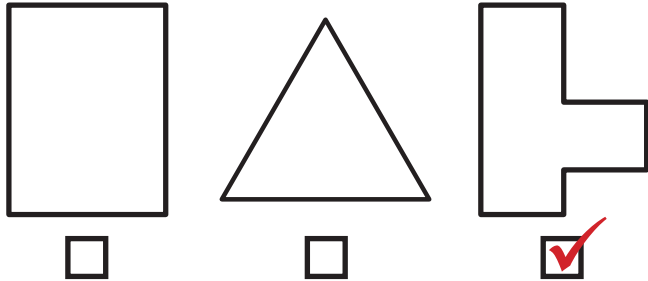
ATEBION

SAFE 11

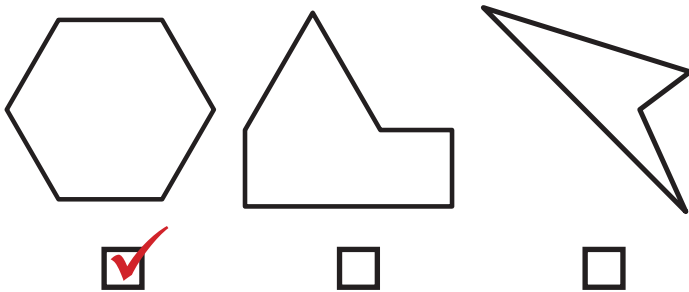
SET: 1

/10

1 Ticiwch y siâp sydd ddim yn gymesur



2 Pa siâp sy'n siâp rheolaidd



3 $1\text{m} = \underline{100} \text{ cm}$

$\frac{1}{4} \text{ m} = \underline{25} \text{ cm}$

4 $10\text{mm} = \underline{1} \text{ cm}$

$40\text{mm} = \underline{4} \text{ cm}$

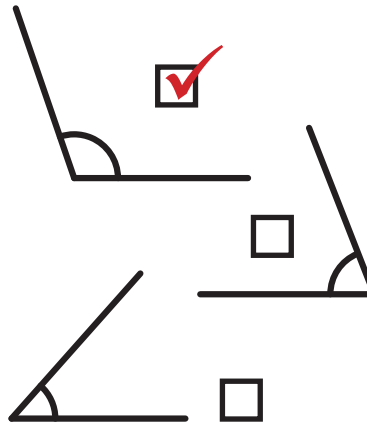
5 $1\text{kg} = \underline{1000} \text{ g}$

$\frac{1}{2} \text{ kg} = \underline{500} \text{ g}$

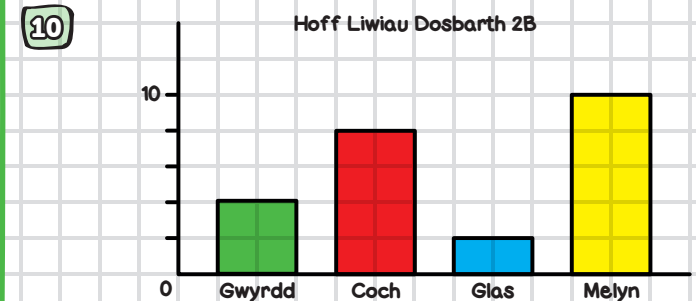
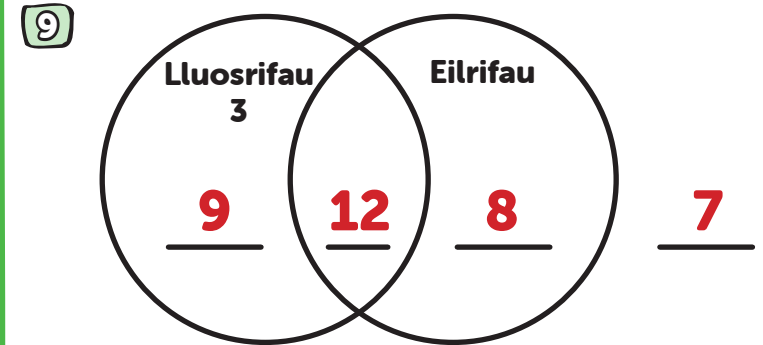
6 $1000\text{ml} = \underline{1} \text{ L}$

$6000\text{ml} = \underline{6} \text{ L}$

7 Ticiwch yr ongl aflem



8 Ysgrifennwch y ffracsiwn sydd wedi'i liwio fel degolyn a ffracsiwn pendrwm



Sawl plentyn ddewisiodd coch? **8**

FY SGÔR DDIWETHAF?!

YDW I WEDI EI GURO?!



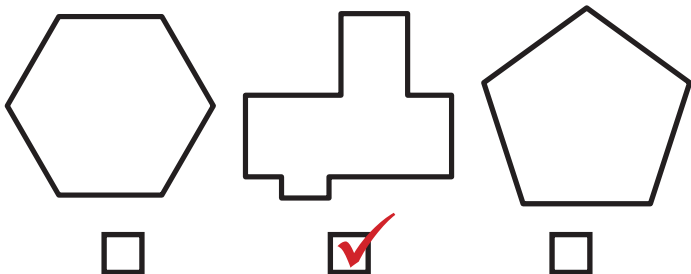
ATEBION

SAFE 11

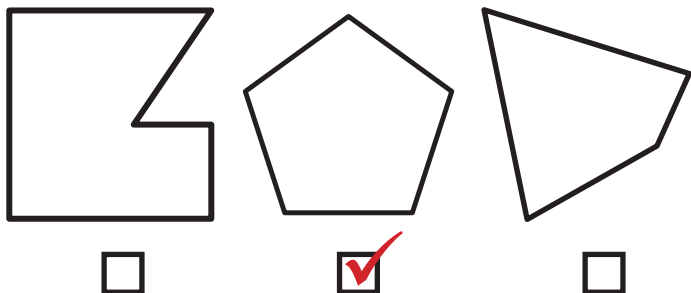
SET: 2

/10

1 Ticiwch y siâp sydd ddim yn gymesur



2 Pa siâp sy'n siâp rheolaidd



3 $1\text{m} = \underline{100} \text{ cm}$

$\frac{3}{4} \text{ m} = \underline{75} \text{ cm}$

4 $1\text{cm} = \underline{10} \text{ mm}$

$\frac{1}{2} \text{ cm} = \underline{5} \text{ mm}$

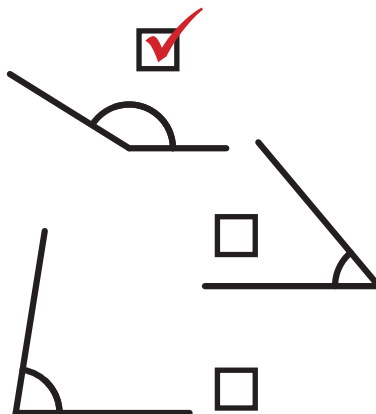
5 $1\text{kg} = \underline{1000} \text{ g}$

$\frac{1}{4} \text{ kg} = \underline{250} \text{ g}$

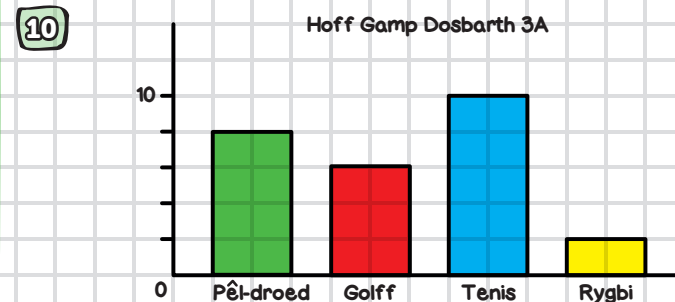
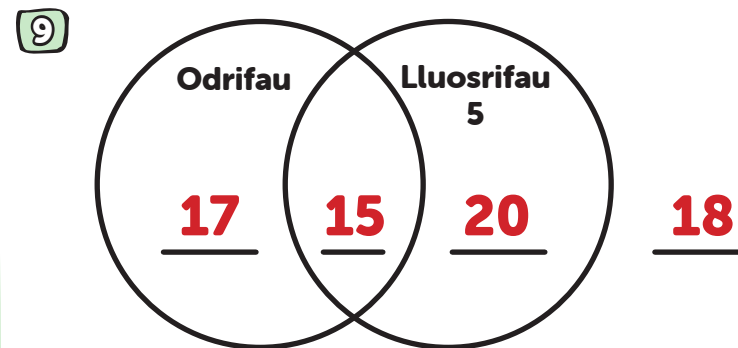
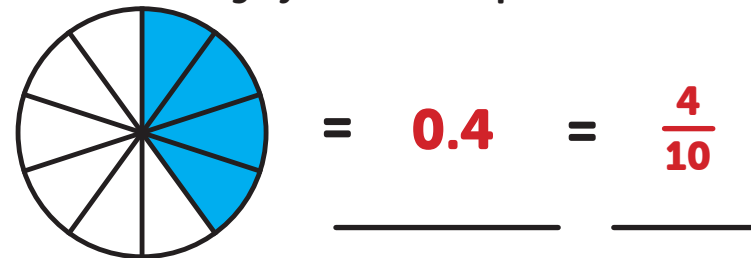
6 $1000\text{ml} = \underline{1} \text{ L}$

$\frac{1}{2} \text{ L} = \underline{500} \text{ ml}$

7 Ticiwch yr ongl aflem



8 Ysgrifennwch y ffracsiwn sydd wedi'i liwio fel degolyn a ffracsiwn pendrwm



Faint sy'n chwarae golff? **6**

FY SGÔR DDIWETHAF?!

YDW I WEDI EI GURO?!



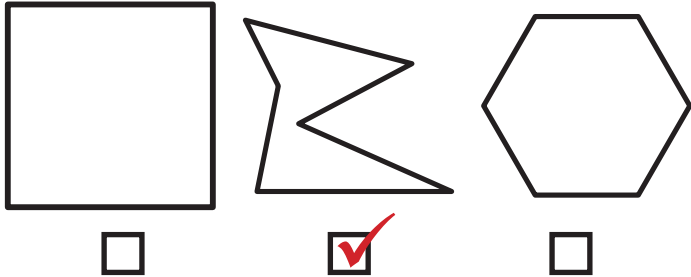
ATEBION

SAFE 11

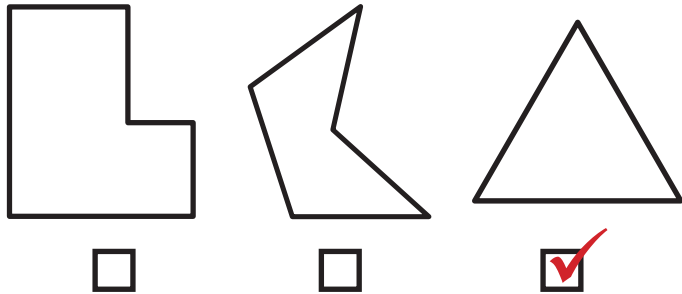
SET: 3

/10

1 Ticiwch y siâp sydd ddim yn gymesur



2 Pa siâp sy'n siâp rheolaidd



3 $100\text{cm} = \underline{1} \text{ m}$

4 $1\text{cm} = \underline{10} \text{ mm}$

$300\text{cm} = \underline{3} \text{ m}$

$30\text{mm} = \underline{3} \text{ cm}$

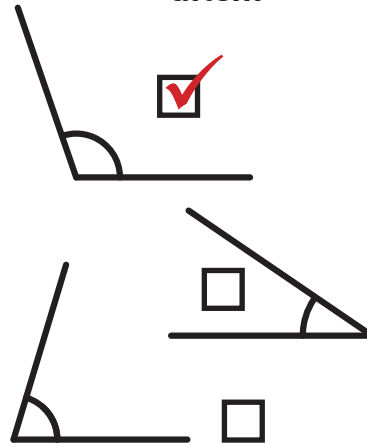
5 $1\text{kg} = \underline{1000} \text{ g}$

$3000\text{g} = \underline{3} \text{ kg}$

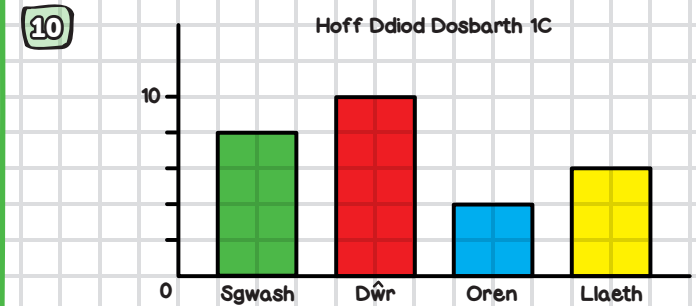
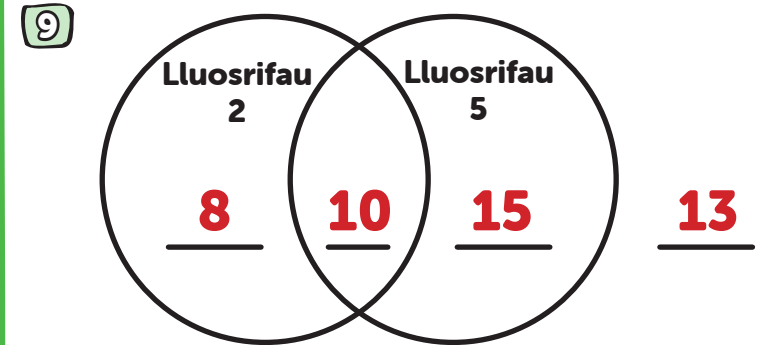
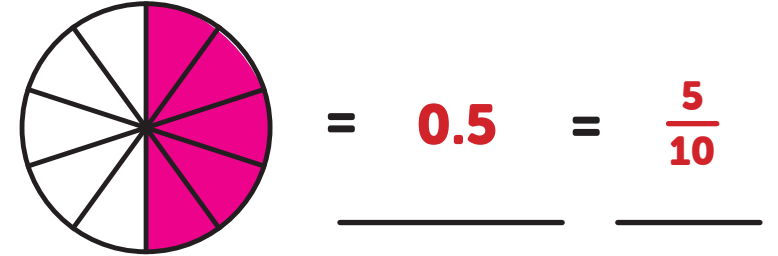
6 $1000\text{ml} = \underline{1} \text{ L}$

$\frac{3}{4} \text{ L} = \underline{750} \text{ ml}$

7 Ticiwch yr ongl aflem



8 Ysgrifennwch y ffraciwn sydd wedi'i liwio fel degolyn a ffraciwn pendrwm



Faint sy'n yfed llaeth? **6**

FY SGÔR DDIWETHAF?

YDW I WEDI EI GURO?



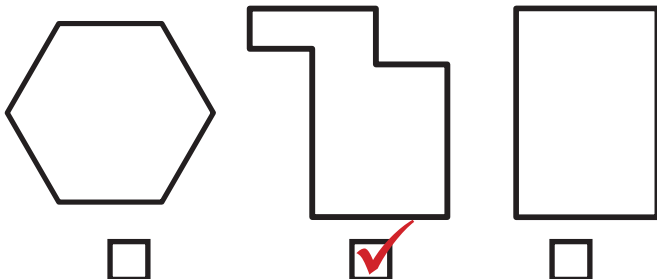
ATEBION

SAFE 11

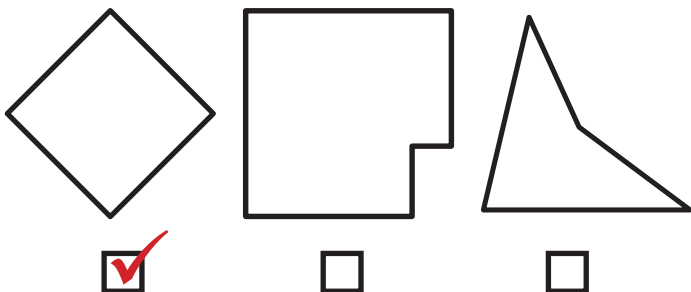
SET: 4

/10

1 Ticiwch y siâp sydd ddim yn gymesur



2 Pa siâp sy'n siâp rheolaidd



3 $100\text{cm} = \underline{1} \text{ m}$

$\frac{1}{2} \text{ m} = \underline{50} \text{ cm}$

4 $1\text{cm} = \underline{10} \text{ mm}$

$50\text{mm} = \underline{5} \text{ cm}$

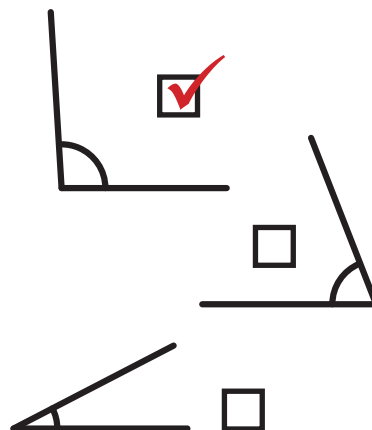
5 $1000\text{g} = \underline{1} \text{ kg}$

$4\text{kg} = \underline{4000} \text{ g}$

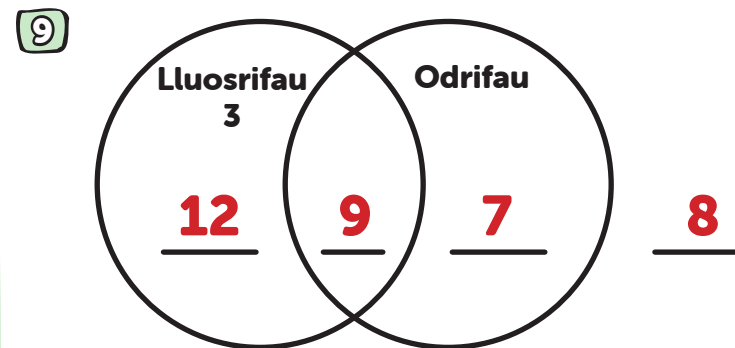
6 $1000\text{ml} = \underline{1} \text{ L}$

$5000\text{ml} = \underline{5} \text{ L}$

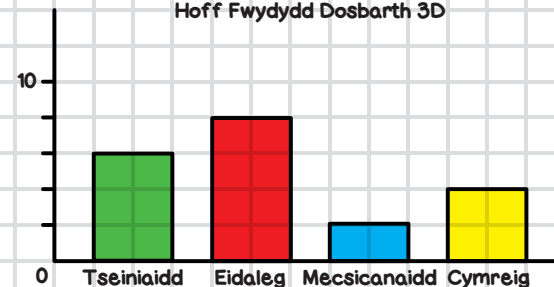
7 Ticiwch yr ongl aflem



8 Ysgrifennwch y ffraciwn sydd wedi'i liwio fel degolyn a ffraciwn pendrwm



10 Hoff Fwydydd Dosbarth 3D



Faint sy'n hoffi bwyd Eidaleg? **8**

FY SGÔR DDIWETHAF?

YDW I WEDI EI GURO?



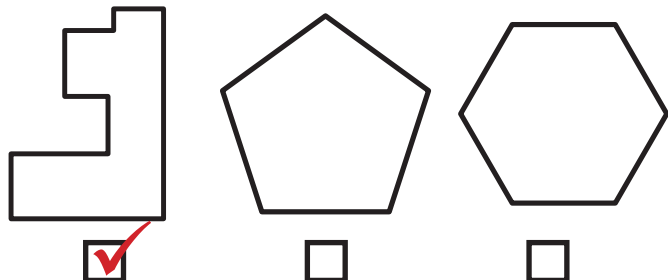
ATEBION

SAFE 11

SET: 5

/10

1 Ticiwch y siâp sydd ddim yn gymesur



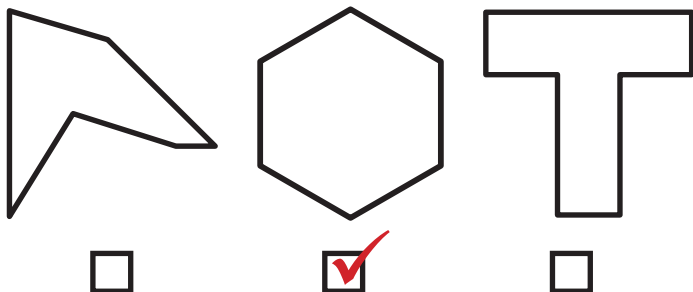
5 $1\text{kg} = \underline{1000} \text{ g}$

$\frac{3}{4} \text{kg} = \underline{750} \text{ g}$

8 Ysgrifennwch y ffraciwn sydd wedi'i liwio fel degolyn a ffraciwn pendrwm

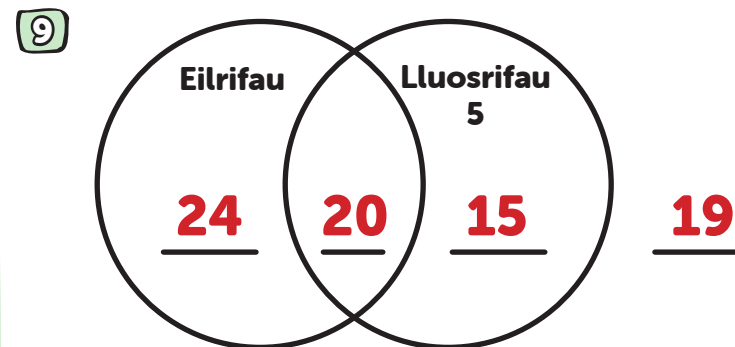


2 Pa siâp sy'n siâp rheolaidd



6 $1000\text{ml} = \underline{1} \text{ L}$

$2000\text{ml} = \underline{2} \text{ L}$



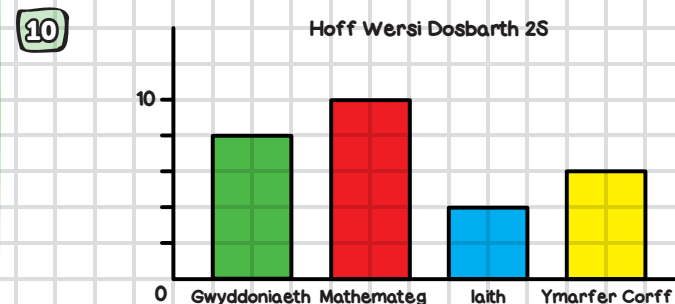
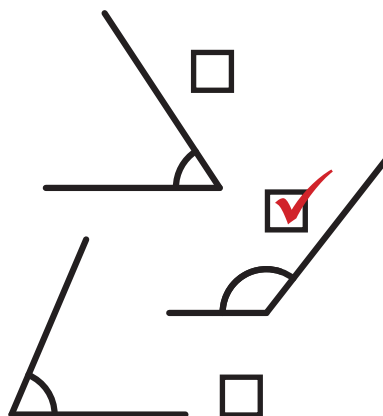
3 $100\text{cm} = \underline{1} \text{ m}$

$\frac{3}{4} \text{ m} = \underline{75} \text{ cm}$

4 $1\text{cm} = \underline{10} \text{ mm}$

$20\text{mm} = \underline{2} \text{ cm}$

7 Ticiwch yr ongl aflem



Faint sy'n hoffi Mathemateg? **10**

FY SGÔR DDIWETHAF?

YDW I WEDI EI GURO?



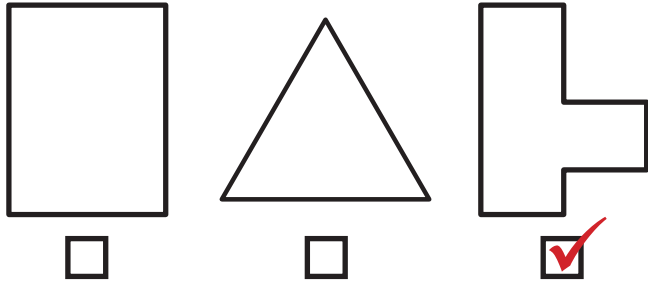
ATEBION

SAFE 11

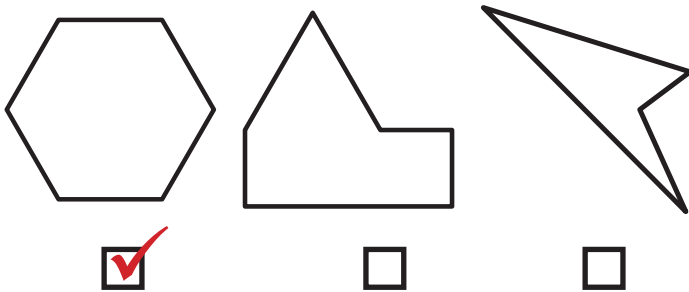
SET: 6

/10

1 Ticiwch y siâp sydd ddim yn gymesur



2 Pa siâp sy'n siâp rheolaidd



3 $1\text{m} = \underline{100}$ cm

4 $10\text{mm} = \underline{1}$ cm

$3\text{m} = \underline{300}$ cm

$70\text{mm} = \underline{7}$ cm

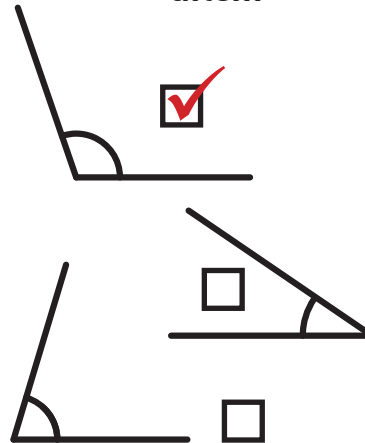
5 $1\text{kg} = \underline{1000}$ g

$\frac{1}{2}\text{kg} = \underline{500}$ g

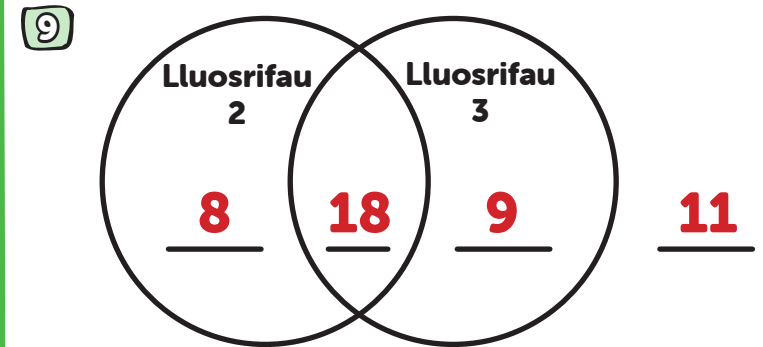
6 $1000\text{ml} = \underline{1}$ L

$\frac{1}{4}\text{L} = \underline{250}$ ml

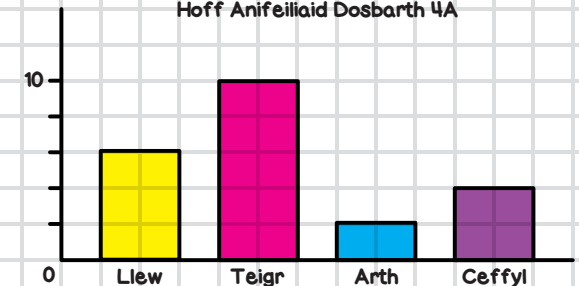
7 Ticiwch yr ongl aflem



8 Ysgrifennwch y ffracsiwn sydd wedi'i liwio fel degolyn a ffracsiwn pendrwm



10 Hoff Anifeiliaid Dosbarth 4A



Faint sy'n hoffi Llewod?

6

FY SGÔR DDIWETHAF?!

YDW I WEDI EI GURO?!



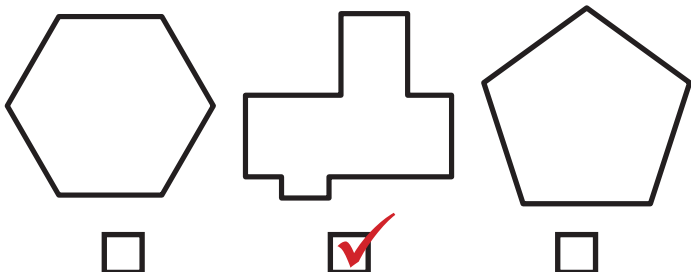
ATEBION

SAFE 11

SET: 7

/10

1 Ticiwch y siâp sydd ddim yn gymesur



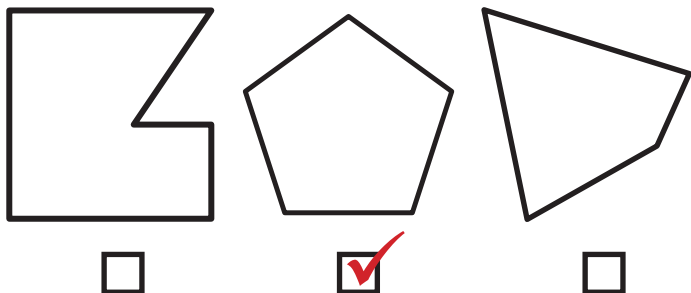
5 $1\text{kg} = \underline{1000} \text{ g}$

$\frac{3}{4} \text{kg} = \underline{750} \text{ g}$

8 Ysgrifennwch y ffracsiwn sydd wedi'i liwio fel degolyn a ffracsiwn pendrwm

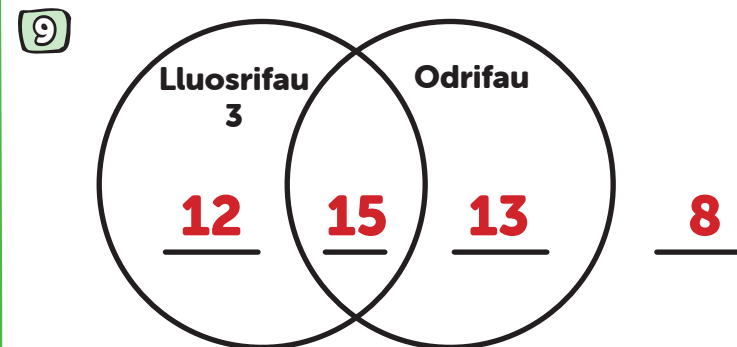


2 Pa siâp sy'n siâp rheolaidd



6 $1\text{L} = \underline{1000} \text{ ml}$

$4\text{L} = \underline{4000} \text{ ml}$



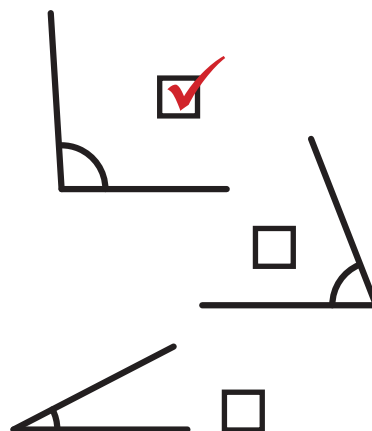
3 $1\text{m} = \underline{100} \text{ cm}$

$200\text{cm} = \underline{2} \text{ m}$

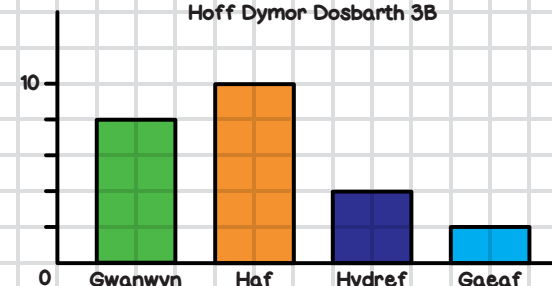
4 $1\text{cm} = \underline{10} \text{ mm}$

$40\text{mm} = \underline{4} \text{ cm}$

7 Ticiwch yr ongl aflem



10 Hoff Dymor Dosbarth 3B



Faint sy'n hoffi'r Gwanwyn? **8**

FY SGÔR DDIWETHAF?

YDW I WEDI EI GURO?



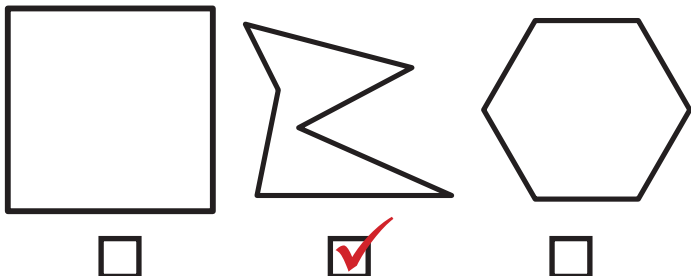
ATEBION

SAFE 11


SET: 8

/10

1 Ticiwch y siâp sydd ddim yn gymesur



2 Pa siâp sy'n siâp rheolaidd



3 $1\text{m} = \underline{100} \text{ cm}$

$\frac{1}{4} \text{kg} = \underline{250} \text{ g}$

4 $1\text{cm} = \underline{10} \text{ mm}$

$60\text{mm} = \underline{6} \text{ cm}$

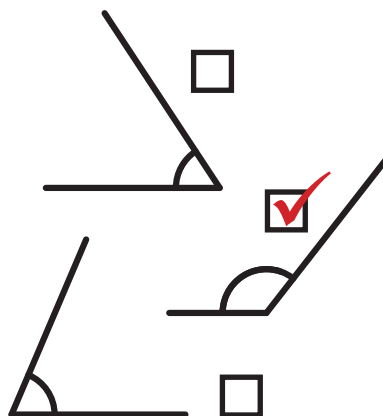
5 $1\text{kg} = \underline{1000} \text{ g}$

$5\text{kg} = \underline{5000} \text{ g}$

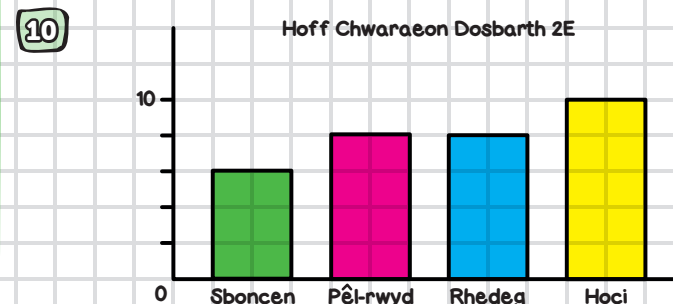
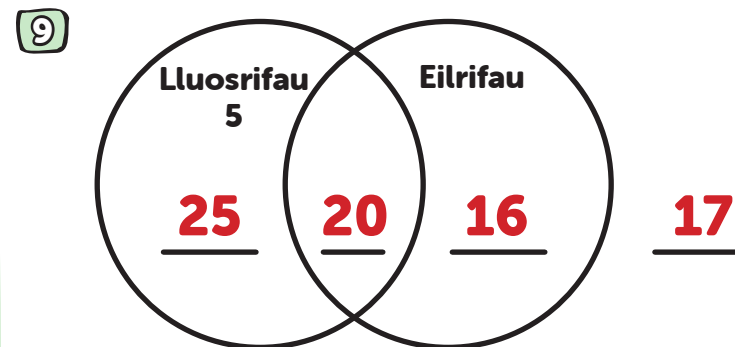
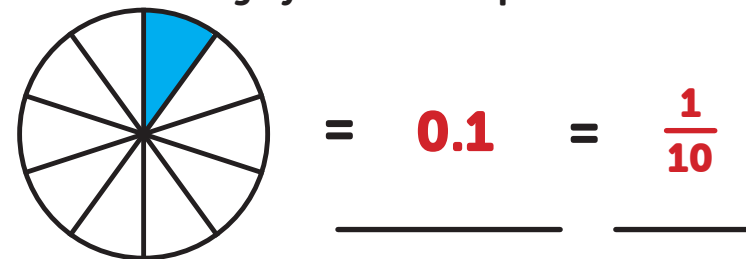
6 $1000\text{ml} = \underline{1} \text{ L}$

$4\text{L} = \underline{4000} \text{ ml}$

7 Ticiwch yr ongl aflem



8 Ysgrifennwch y ffraciwn sydd wedi'i liwio fel degolyn a ffraciwn pendrwm



Faint sy'n hoffi sboncen? **6**

FY SGÔR DDIWETHAF?

YDW I WEDI EI GURO?



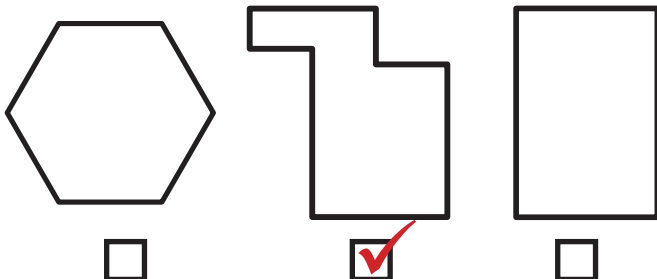
ATEBION

SAFE 11

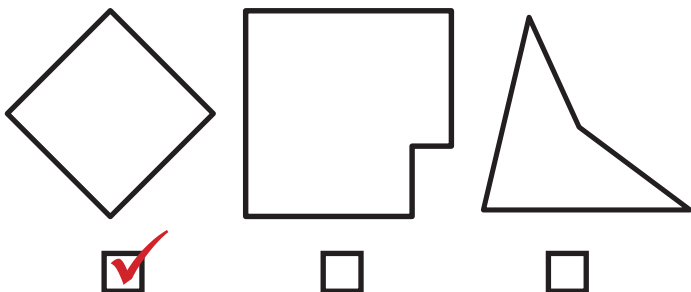
SET: 9

/10

1 Ticiwch y siâp sydd ddim yn gymesur



2 Pa siâp sy'n siâp rheolaidd



3 $100\text{cm} = \underline{1} \text{ m}$

$\frac{3}{4} \text{ kg} = \underline{750} \text{ g}$

4 $10\text{mm} = \underline{1} \text{ cm}$

$\frac{1}{2} \text{ cm} = \underline{5} \text{ mm}$

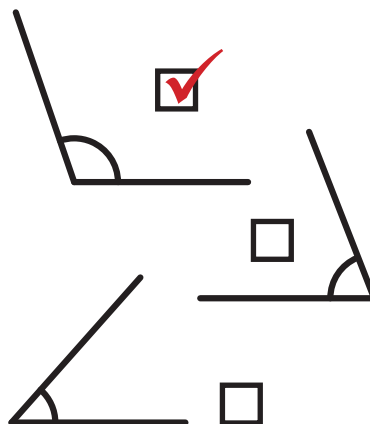
5 $1000\text{g} = \underline{1} \text{ kg}$

$3\text{kg} = \underline{3000} \text{ g}$

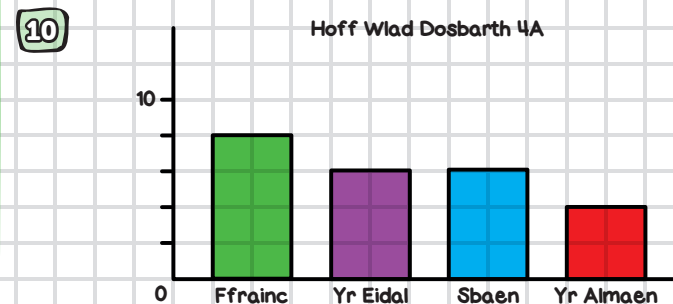
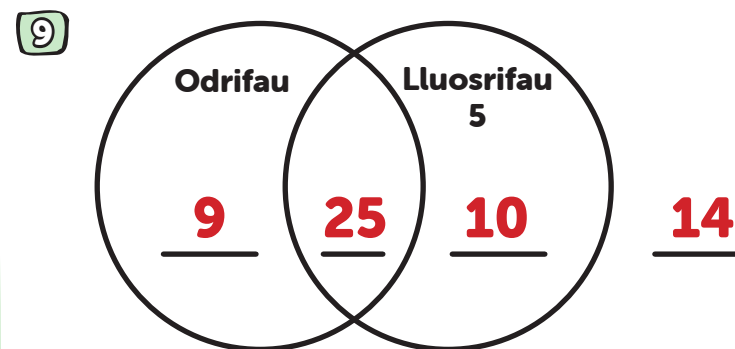
6 $1\text{L} = \underline{1000} \text{ ml}$

$6000\text{ml} = \underline{6} \text{ L}$

7 Ticiwch yr ongl aflem



8 Ysgrifennwch y ffraciwn sydd wedi'i liwio fel degolyn a ffraciwn pendrwm



Faint sy'n hoffi'r Almaen? **4**

FY SGÔR DDIWETHAF?!

YDW I WEDI EI GURO?!



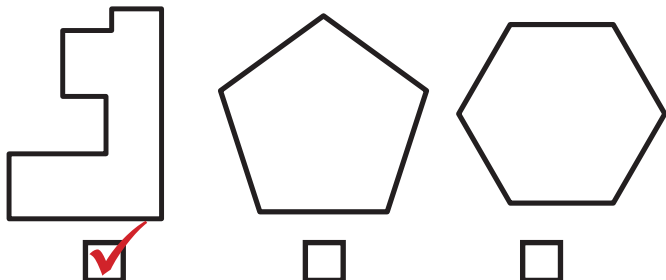
ATEBION

SAFE 11

SET: 10

/10

1 Ticiwch y siâp sydd ddim yn gymesur



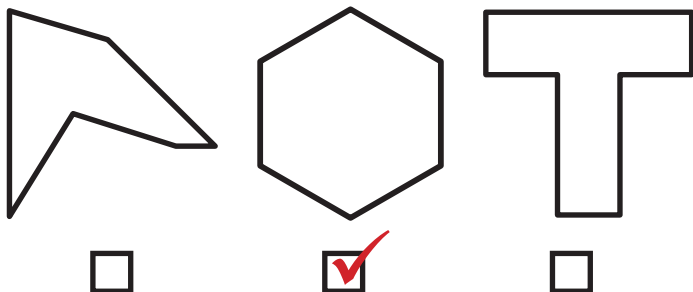
5 $1000\text{g} = \underline{1}$ kg

$4\text{kg} = \underline{4000}$ g

8 Ysgrifennwch y ffracsiwn sydd wedi'i liwio fel degolyn a ffracsiwn pendrwm




2 Pa siâp sy'n siâp rheolaidd

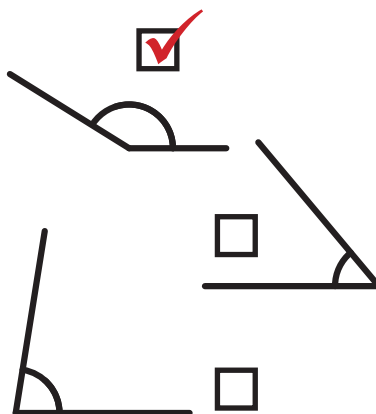


6 $1\text{L} = \underline{1000}$ ml

$3000\text{ml} = \underline{3}$ L



7 Ticiwch yr ongl aflem



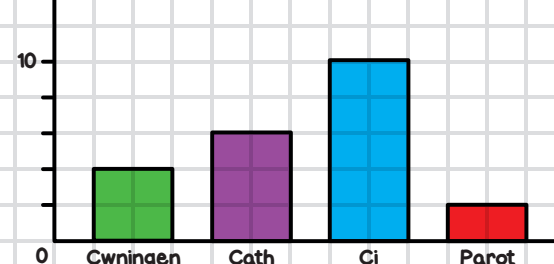
3 $1\text{m} = \underline{100}$ cm

$700\text{cm} = \underline{7}$ m

4 $1\text{cm} = \underline{10}$ mm

$90\text{mm} = \underline{9}$ cm

10 Hoff Anifeiliaid Anwes Dosbarth 1C



Faint sy'n hoffi cathod?

6

FY SGÔR DDIWETHAF?!

YDW I WEDI EI GURO?!

