

Part of

**BEAT
THAT!**



Welsh Language

Big Maths

The **SAFE** Challenges!

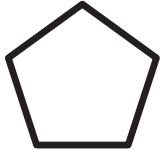
Thank you to Ysgol Gymraeg Treganna, Ysgol Gymraeg Glan Ceubal and Ysgol Morfa Rhianedd for their generous help in translating the SAFE Challenges to Welsh.




Big Maths Beat That!: Teacher Notes

SAFE Challenge 9			
	Step Location in the SAFE framework		Title of Step
	Progress Drive	Step No.	
Q1	Shape: 2D Shapes	17	I can compare and sort many 2D shapes
Q2	Amounts: Amounts of Distance	7, 10	I can compare descriptions of distance in practical contexts and record the comparisons with symbols
	Amounts: Amounts of Mass	7, 10	I can compare descriptions of mass in practical contexts and record the comparisons with symbols
	Amounts: Amounts of Space	7, 10	I can compare descriptions of capacity in practical contexts and record the comparisons with symbols
Q3	Amounts: Amounts of Money	11	I can give change from a pound
Q4	Amounts: Amounts of Time	19	I can place different periods of time in order
Q5	Amounts: Amounts of Time: Telling The Time	8	I can tell the time!
Q6	Amounts: Amounts of Turn	5	I can recognise that a quarter turn is a right angle
Q7	Fractions: Fractions: Counting	4	I can count in quarters
Q8	Fractions: Fractions: Learn Its	3	I can quickly write out my fractions Learn Its $\frac{1}{2}$ of 10 = 5, $\frac{1}{2}$ of 8 = 4, $\frac{1}{2}$ of 6 = 3, $\frac{1}{2}$ of 4 = 2, $\frac{1}{2}$ of 2 = 1
Q9	Fractions: Fractions: Learn Its	4	I know all of my x2, x5, x10 tables as fractions Learn Its
Q10	Fractions: Fractions: It's Nothing New	3	I can add and subtract halves, quarters and thirds

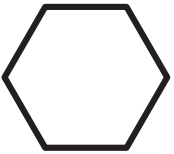
1 Rhowch linell o'r siâp at ei enw



Pedrochr



Hecsagon



Pentagon

3 Faint o newid o

£ 1



65c → _____


4 Ticiwch y cyfnod lleiaf o amser

10
Munud

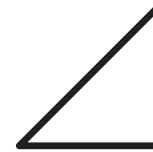
3
Wythnos

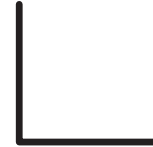
3
Munud


5 Faint o'r gloch yw hi?



6 Pa un yw'r ongl sgwâr?







8 $\frac{1}{2} \circ 6 =$

$$\frac{1}{2} \circ 2 =$$

$$\frac{1}{2} \circ 10 =$$

9 $\frac{1}{5} \circ 20 =$

$$\frac{1}{10} \circ 40 =$$

$$\frac{1}{2} \circ 18 =$$

10 $\frac{3}{4} - \frac{1}{4} =$

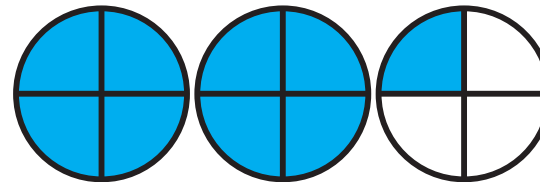
2 < neu >

3m _____ 10cm

5g _____ 5kg

2L _____ 20ml

7 Ysgrifennwch hwn fel rhif cymysg

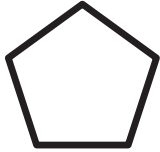


FY SGÔR DDIWETHAF?!

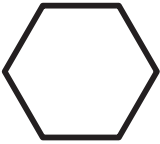
YDW I WEDI EI GURO?!



1 Rhowch linell o'r siâp at ei enw



Pedrochr



Hecsgon



Pentagon

3 Faint o newid o

£ 1



32c → _____


4 Ticiwch y cyfnod hiraf o amser

10
Wythnos

3
Mis

1
Flwyddyn


5 Faint o'r gloch yw hi?



6 Pa un yw'r ongl sgwâr?







8 $\frac{1}{2} \circ 8 =$

$$\frac{1}{2} \circ 6 =$$

$$\frac{1}{2} \circ 4 =$$

9 $\frac{1}{5} \circ 40 =$

$$\frac{1}{10} \circ 20 =$$

$$\frac{1}{2} \circ 16 =$$

10 $\frac{1}{3} + \frac{1}{3} =$


2 < neu >

1m _____ 120cm

2kg _____ 70g

120ml _____ 3L

7 Ysgrifennwch hwn fel rhif cymysg



FY SGÔR DDIWETHAF?!


YDW I WEDI EI GURO?!



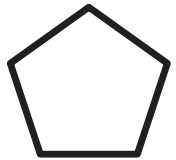
1 Rhowch linell o'r siâp at ei enw



Hecsgon



Pentagon



Pedrochr

3 Faint o newid o

£ 1




80c → _____


4 Ticiwch y cyfnod hiraf o amser

2	40	50
Fis	Diwrnod	Munud
<input type="checkbox"/>	<input type="checkbox"/>	<input type="checkbox"/>

5 Faint o'r gloch yw hi?



6 Pa un yw'r ongl sgwâr?



8 $\frac{1}{2} \circ 2 =$

$$\frac{1}{2} \circ 6 =$$

$$\frac{1}{2} \circ 8 =$$

9 $\frac{1}{5} \circ 45 =$

$$\frac{1}{10} \circ 70 =$$

$$\frac{1}{2} \circ 12 =$$

10 $\frac{1}{4} + \frac{2}{4} =$

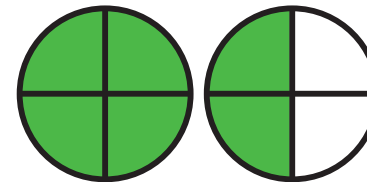
2 < neu >

4kg _____ 450g

10m _____ 200cm

2L _____ 150ml

7 Ysgrifennwch hwn fel rhif cymysg

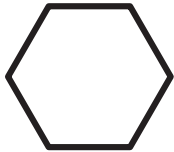


FY SGÔR DDIWETHAF?!


YDW I WEDI EI GURO?!



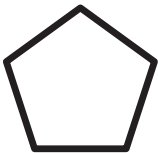
1 Rhowch linell o'r siâp at ei enw



Pedrochr



Hecsagon



Pentagon

3 Faint o newid o

£ 1




34c → _____

4 Ticiwch y cyfnod lleiaf o amser

25	1	2
Munud	Flwyddyn	Ddiwrnod
<input type="checkbox"/>	<input type="checkbox"/>	<input type="checkbox"/>

5 Faint o'r gloch yw hi?



6 Pa un yw'r ongl sgwâr?



8 $\frac{1}{2} \circ 4 =$

$$\frac{1}{2} \circ 10 =$$

$$\frac{1}{2} \circ 2 =$$

9 $\frac{1}{5} \circ 25 =$

$$\frac{1}{10} \circ 50 =$$

$$\frac{1}{2} \circ 6 =$$

10 $\frac{2}{3} - \frac{1}{3} =$

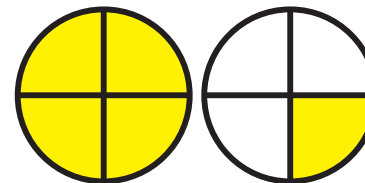
2 < neu >

4L _____ 500ml

1kg _____ 10g

20cm _____ 1m

7 Ysgrifennwch hwn fel rhif cymysg

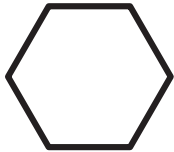


FY SGÔR DDIWETHAF?!


YDW I WEDI EI GURO?!



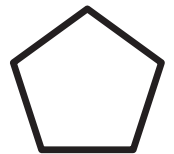
1 Rhowch linell o'r siâp at ei enw



Pentagon



Hecsgon



Pedrochr

3 Faint o newid o

£ 1




92c → _____

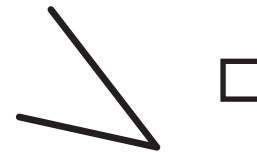
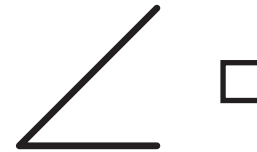
4 Ticiwch y cyfnod hiraf o amser

30	40	20
Blwyddyn	Diwrnod	Mis
<input type="checkbox"/>	<input type="checkbox"/>	<input type="checkbox"/>

5 Faint o'r gloch yw hi?



6 Pa un yw'r ongl sgwâr?



8 $\frac{1}{2} \circ 10 =$

$$\frac{1}{2} \circ 2 =$$

$$\frac{1}{2} \circ 8 =$$

9 $\frac{1}{5} \circ 10 =$

$$\frac{1}{10} \circ 80 =$$

$$\frac{1}{2} \circ 10 =$$

10 $\frac{1}{4} + \frac{1}{4} =$

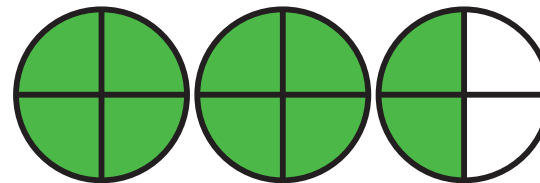
2 < neu >

1200ml _____ 1L

50g _____ 50kg

5m _____ 50cm

7 Ysgrifennwch hwn fel rhif cymysg

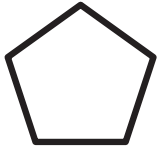


FY SGÔR DDIWETHAF?!

YDW I WEDI EI GURO?!




1 Rhowch linell o'r siâp at ei enw



Pedrochr



Hecsgon



Pentagon

3 Faint o newid o

£ 1



5c



4 Ticiwch y cyfnod hiraf o amser

2
Funud




10
Eiliad




1
Diwrnod



5 Faint o'r gloch yw hi?



6 Pa un yw'r ongl sgwâr?



8 $\frac{1}{2} \circ 4 =$

$$\frac{1}{2} \circ 8 =$$

$$\frac{1}{2} \circ 6 =$$

9 $\frac{1}{5} \circ 50 =$

$$\frac{1}{10} \circ 60 =$$

$$\frac{1}{2} \circ 18 =$$

10 $\frac{3}{4} - \frac{2}{4} =$

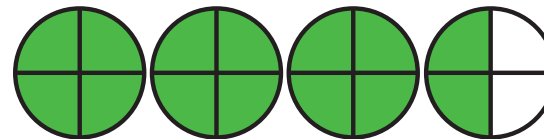
2 < neu >

100ml _____ 150ml

2kg _____ 200g

5cm _____ 4m

7 Ysgrifennwch hwn fel rhif cymysg

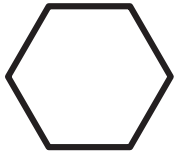


FY SGÔR DDIWETHAF?!


YDW I WEDI EI GURO?!



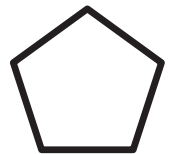
1 Rhowch linell o'r siâp at ei enw



Pentagon



Hecsgon



Pedrochr

3 Faint o newid o

£ 1



25c → _____


4 Ticiwch y cyfnod lleiaf o amser

1
Munud

10
Eiliad

2
Wythnos


5 Faint o'r gloch yw hi?



6 Pa un yw'r ongl sgwâr?







8 $\frac{1}{2} \circ 10 =$

$$\frac{1}{2} \circ 2 =$$

$$\frac{1}{2} \circ 4 =$$

9 $\frac{1}{5} \circ 40 =$

$$\frac{1}{10} \circ 40 =$$

$$\frac{1}{2} \circ 20 =$$

10 $\frac{1}{3} + \frac{1}{3} =$

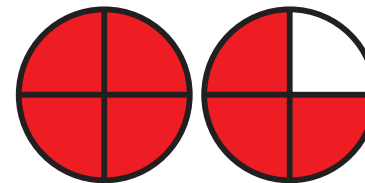
2 < neu >

2L _____ 400ml

2kg _____ 1kg

1m _____ 10cm

7 Ysgrifennwch hwn fel rhif cymysg




FY SGÔR DDIWETHAF?!

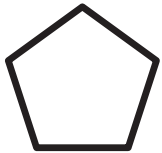
YDW I WEDI EI GURO?!



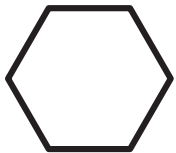
1 Rhowch linell o'r siâp at ei enw



Hecsgon



Pedrochr



Pentagon

3 Faint o newid o

£ 1




34c → _____

4 Ticiwch y cyfnod hiraf o amser

5	3	1
Diwrnod	Wythnos	Mis
<input type="checkbox"/>	<input type="checkbox"/>	<input type="checkbox"/>

5 Faint o'r gloch yw hi?



6 Pa un yw'r ongl sgwâr?



8 $\frac{1}{2} \circ 2 =$

$$\frac{1}{2} \circ 4 =$$

$$\frac{1}{2} \circ 6 =$$

9 $\frac{1}{5} \circ 15 =$

$$\frac{1}{10} \circ 20 =$$

$$\frac{1}{2} \circ 12 =$$

10 $\frac{3}{4} - \frac{1}{4} =$

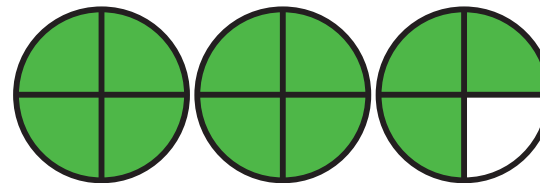
2 < neu >

1cm _____ 1m

5kg _____ 5g

20L _____ 200ml

7 Ysgrifennwch hwn fel rhif cymysg




FY SGÔR DDIWETHAF?!

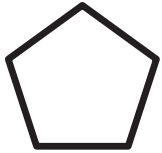
YDW I WEDI EI GURO?!



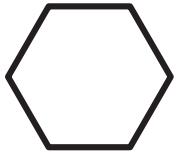
1 Rhowch linell o'r siâp at ei enw



Pedrochr



Hecsgon



Pentagon

3 Faint o newid o

£ 1




60c → _____

4 Ticiwch y cyfnod hiraf o amser

2	100	18 Mis
Flynedd	Eiliad	
<input type="checkbox"/>	<input type="checkbox"/>	<input type="checkbox"/>

5 Faint o'r gloch yw hi?



6 Pa un yw'r ongl sgwâr?



8 $\frac{1}{2} \circ 10 =$

$$\frac{1}{2} \circ 8 =$$

$$\frac{1}{2} \circ 2 =$$

9 $\frac{1}{5} \circ 30 =$

$$\frac{1}{10} \circ 90 =$$

$$\frac{1}{2} \circ 14 =$$

10 $\frac{1}{3} + \frac{1}{3} =$

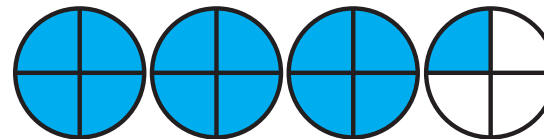
2 < neu >

200g _____ 1kg

4L _____ 4500ml

50ml _____ 30ml

7 Ysgrifennwch hwn fel rhif cymysg




FY SGÔR DDIWETHAF?!

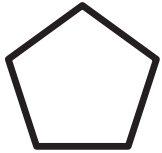
YDW I WEDI EI GURO?!



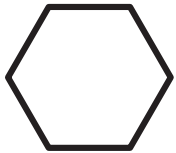
1 Rhowch linell o'r siâp at ei enw



Hecsgon



Pedrochr



Pentagon

3 Faint o newid o

£ 1


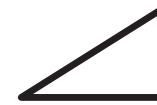


43c → _____

4 Ticiwch y cyfnod lleiaf o amser

3	30	11
Mis	Munud	Diwrnod
<input type="checkbox"/>	<input type="checkbox"/>	<input type="checkbox"/>

6 Pa un yw'r ongl sgwâr?



8 $\frac{1}{2} \circ 4 =$

$$\frac{1}{2} \circ 10 =$$

$$\frac{1}{2} \circ 6 =$$

9 $\frac{1}{5} \circ 45 =$

$$\frac{1}{10} \circ 30 =$$

$$\frac{1}{2} \circ 8 =$$

10 $\frac{2}{4} - \frac{1}{4} =$


2 < neu >

3L _____ 2L

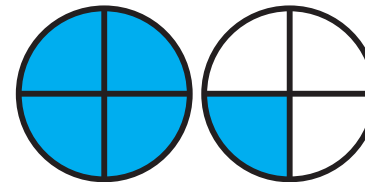
1kg _____ 1700g

20cm _____ 2m

5 Faint o'r gloch yw hi?



7 Ysgrifennwch hwn fel rhif cymysg




FY SGÔR DDIWETHAF?!

YDW I WEDI EI GURO?!



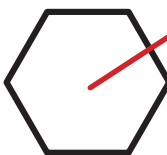
1 Rhowch linell o'r siâp at ei enw



Pedrochr



Hecsgon



Pentagon

3 Faint o newid o

£ 1



65c → 35c


4 Ticiwch y cyfnod lleiaf o amser

10
Munud

3
Wythnos

3
Munud

5 Faint o'r gloch yw hi?

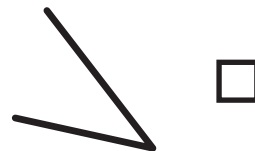


11:40

6 Pa un yw'r ongl sgwâr?







8 $\frac{1}{2} \circ 6 =$ **3**

$\frac{1}{2} \circ 2 =$ **1**

$\frac{1}{2} \circ 10 =$ **5**

9 $\frac{1}{5} \circ 20 =$ **4**

$\frac{1}{10} \circ 40 =$ **4**

$\frac{1}{2} \circ 18 =$ **9**

10 $\frac{3}{4} - \frac{1}{4} =$ **$\frac{2}{4}$**

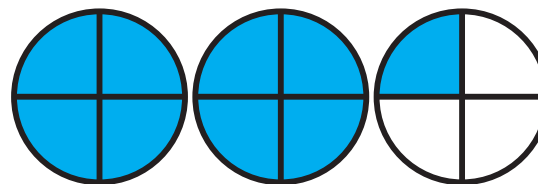
2 < neu >

3m > 10cm

5g < 5kg

2L > 20ml

7 Ysgrifennwch hwn fel rhif cymysg



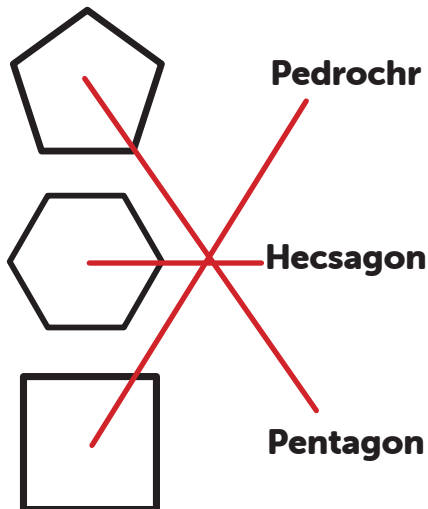
$2 \frac{1}{4}$

FY SGÔR DDIWETHAF?!

YDW I WEDI EI GURO?!



1 Rhowch linell o'r siâp at ei enw



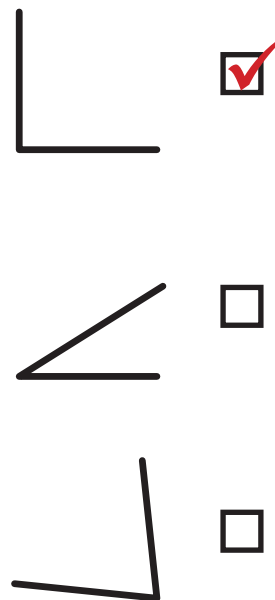
3 Faint o newid o



4 Ticiwch y cyfnod hiraf o amser

- 10 Wythnos
- 3 Mis
- 1 Flwyddyn

6 Pa un yw'r ongl sgwâr?



8 $\frac{1}{2} \circ 8 = 4$

$\frac{1}{2} \circ 6 = 3$

$\frac{1}{2} \circ 4 = 2$

9 $\frac{1}{5} \circ 40 = 8$

$\frac{1}{10} \circ 20 = 2$

$\frac{1}{2} \circ 16 = 8$

10 $\frac{1}{3} + \frac{1}{3} = \frac{2}{3}$


2 < neu >

1m < 120cm

2kg > 70g


120ml < 3L

5 Faint o'r gloch yw hi?



04:40

7 Ysgrifennwch hwn fel rhif cymysg



2 $\frac{3}{4}$

FY SGÔR DDIWETHAF?!

YDW I WEDI EI GURO?!



1 Rhowch linell o'r siâp at ei enw



3 Faint o newid o

£ 1




80c → 20c

4 Ticiwch y cyfnod hiraf o amser

2	40	50
Fis	Diwrnod	Munud
<input checked="" type="checkbox"/>	<input type="checkbox"/>	<input type="checkbox"/>

5 Faint o'r gloch yw hi?



09:55

6 Pa un yw'r ongl sgwâr?



8 $\frac{1}{2} \circ 2 =$ **1**

$\frac{1}{2} \circ 6 =$ **3**

$\frac{1}{2} \circ 8 =$ **4**

9 $\frac{1}{5} \circ 45 =$ **9**

$\frac{1}{10} \circ 70 =$ **7**

$\frac{1}{2} \circ 12 =$ **6**

10 $\frac{1}{4} + \frac{2}{4} =$ **$\frac{3}{4}$**

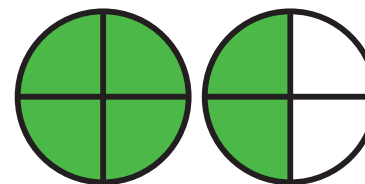
2 < neu >

4kg > 450g

10m > 200cm

2L > 150ml

7 Ysgrifennwch hwn fel rhif cymysg



$1 \frac{2}{4}$

FY SGÔR DDIWETHAF?!

YDW I WEDI EI GURO?!



ATEBION

SAFE 9

SET: 4

/10

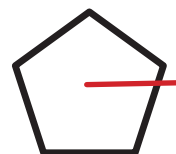
1 Rhowch linell o'r siâp at ei enw



Pedrochr



Hecsagon



Pentagon

3 Faint o newid o

£ 1



34c → 66c

4 Ticiwch y cyfnod lleiaf o amser

25
Munud




1
Flwyddyn



2
Ddiwrnod



5 Faint o'r gloch yw hi?



07:10

6 Pa un yw'r ongl sgwâr?



8 $\frac{1}{2} \circ 4 = 2$

$\frac{1}{2} \circ 10 = 5$

$\frac{1}{2} \circ 2 = 1$

9 $\frac{1}{5} \circ 25 = 5$

$\frac{1}{10} \circ 50 = 5$

$\frac{1}{2} \circ 6 = 3$

10 $\frac{2}{3} - \frac{1}{3} = \frac{1}{3}$

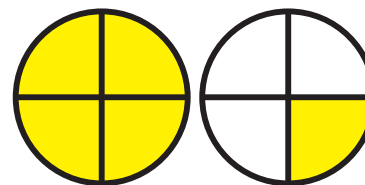
2 < neu >

4L > 500ml

1kg > 10g

20cm < 1m

7 Ysgrifennwch hwn fel rhif cymysg



1 $\frac{1}{4}$

FY SGÔR DDIWETHAF?!

YDW I WEDI EI GURO?!



ATEBION

SAFE 9

SET: 5

/10

1 Rhowch linell o'r siâp at ei enw



Pentagon



Hecsgagon



Pedrochr

3 Faint o newid o

£ 1

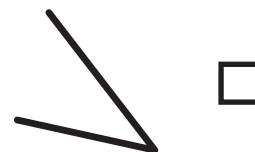


92c → 8c

4 Ticiwch y cyfnod hiraf o amser

30	40	20
Blwyddyn	Diwrnod	Mis
<input checked="" type="checkbox"/>	<input type="checkbox"/>	<input type="checkbox"/>

6 Pa un yw'r ongl sgwâr?



8 $\frac{1}{2} \circ 10 = 5$

$\frac{1}{2} \circ 2 = 1$

$\frac{1}{2} \circ 8 = 4$

9 $\frac{1}{5} \circ 10 = 2$

$\frac{1}{10} \circ 80 = 8$

$\frac{1}{2} \circ 10 = 5$

10 $\frac{1}{4} + \frac{1}{4} = \frac{2}{4}$


2 < neu >

1200ml > 1L

50g < 50kg


5m > 50cm

5 Faint o'r gloch yw hi?



02:25

7 Ysgrifennwch hwn fel rhif cymysg



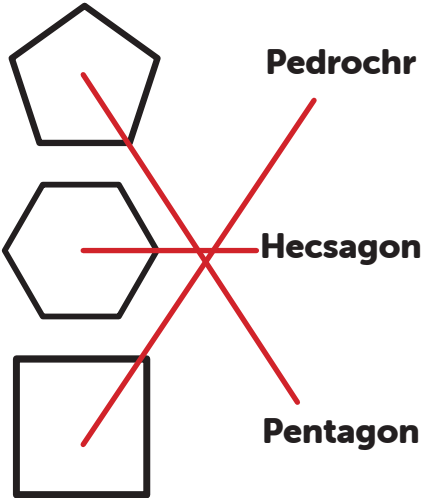
2 $\frac{2}{4}$

FY SGÔR DDIWETHAF?!

YDW I WEDI EI GURO?!



1 Rhowch linell o'r siâp at ei enw



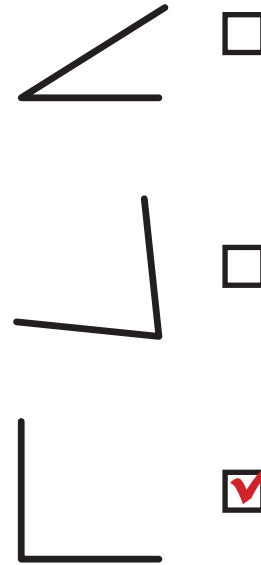
3 Faint o newid o



4 Ticiwch y cyfnod hiraf o amser



6 Pa un yw'r ongl sgwâr?



8 $\frac{1}{2} \circ 4 = 2$

$\frac{1}{2} \circ 8 = 4$

$\frac{1}{2} \circ 6 = 3$

9 $\frac{1}{5} \circ 50 = 10$

$\frac{1}{10} \circ 60 = 6$

$\frac{1}{2} \circ 18 = 9$

10 $\frac{3}{4} - \frac{2}{4} = \frac{1}{4}$


2 < neu >

100ml < 150ml

2kg > 200g

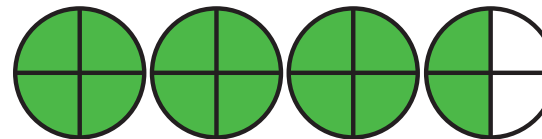
5cm < 4m

5 Faint o'r gloch yw hi?



04:35

7 Ysgrifennwch hwn fel rhif cymysg



$3 \frac{2}{4}$

FY SGÔR DDIWETHAF?!

YDW I WEDI EI GURO?!



ATEBION

SAFE 9


SET: 7

/10

1 Rhowch linell o'r siâp at ei enw



Pentagon



Hecsgon



Pedrochr

3 Faint o newid o

£ 1



25c → 75c


4 Ticiwch y cyfnod lleiaf o amser

1
Munud

10
Eiliad

2
Wythnos

5 Faint o'r gloch yw hi?




10:20

6 Pa un yw'r ongl sgwâr?







8 $\frac{1}{2} \circ 10 =$ **5**

$\frac{1}{2} \circ 2 =$ **1**

$\frac{1}{2} \circ 4 =$ **2**

9 $\frac{1}{5} \circ 40 =$ **8**

$\frac{1}{10} \circ 40 =$ **4**

$\frac{1}{2} \circ 20 =$ **10**

10 $\frac{1}{3} + \frac{1}{3} =$ **$\frac{2}{3}$**

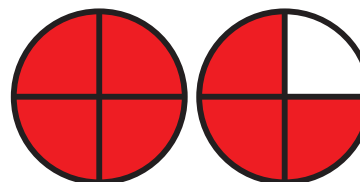
2 < neu >

2L > 400ml

2kg > 1kg

1m > 10cm

7 Ysgrifennwch hwn fel rhif cymysg




1 $\frac{3}{4}$

FY SGÔR DDIWETHAF?!

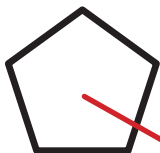
YDW I WEDI EI GURO?!



1 Rhowch linell o'r siâp at ei enw



Hecsgon



Pedrochr



Pentagon

3 Faint o newid o

£ 1




34c → 66c

4 Ticiwch y cyfnod hiraf o amser

5	3	1
Diwrnod	Wythnos	Mis
<input type="checkbox"/>	<input type="checkbox"/>	<input checked="" type="checkbox"/>

5 Faint o'r gloch yw hi?



12:10

6 Pa un yw'r ongl sgwâr?



8 $\frac{1}{2} \circ 2 =$ **1**

$\frac{1}{2} \circ 4 =$ **2**

$\frac{1}{2} \circ 6 =$ **3**

9 $\frac{1}{5} \circ 15 =$ **3**

$\frac{1}{10} \circ 20 =$ **2**

$\frac{1}{2} \circ 12 =$ **6**

10 $\frac{3}{4} - \frac{1}{4} =$ **$\frac{2}{4}$**


2 < neu >

1cm < 1m

5kg > 5g

20L > 200ml

7 Ysgrifennwch hwn fel rhif cymysg



2 $\frac{3}{4}$

FY SGÔR DDIWETHAF?!

YDW I WEDI EI GURO?!



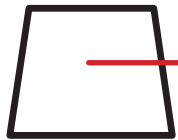
ATEBION

SAFE 9

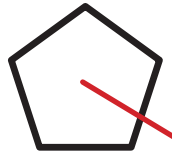
SET: 9

/10

1 Rhowch linell o'r siâp at ei enw



Pedrochr



Hecsgon



Pentagon

3 Faint o newid o

£ 1




60c → 40c

4 Ticiwch y cyfnod hiraf o amser

2	100	18 Mis
Flynedd	Eiliad	
<input checked="" type="checkbox"/>	<input type="checkbox"/>	<input type="checkbox"/>

5 Faint o'r gloch yw hi?



01:55

6 Pa un yw'r ongl sgwâr?



8 $\frac{1}{2} \circ 10 =$ **5**

$\frac{1}{2} \circ 8 =$ **4**

$\frac{1}{2} \circ 2 =$ **1**

9 $\frac{1}{5} \circ 30 =$ **6**

$\frac{1}{10} \circ 90 =$ **9**

$\frac{1}{2} \circ 14 =$ **7**

10 $\frac{1}{3} + \frac{1}{3} =$ **$\frac{2}{3}$**

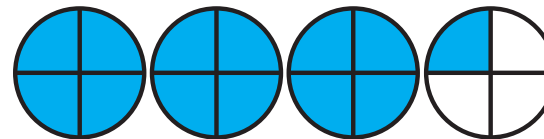
2 < neu >

200g < 1kg

4L < 4500ml

50ml > 30ml

7 Ysgrifennwch hwn fel rhif cymysg



$3 \frac{1}{4}$

FY SGÔR DDIWETHAF?!

YDW I WEDI EI GURO?!



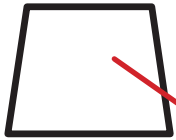
ATEBION

SAFE 9

SET: 10

/10

1 Rhowch linell o'r siâp at ei enw



Hecsgon



Pedrochr



Pentagon

3 Faint o newid o

£ 1




43c → 57c

4 Ticiwch y cyfnod lleiaf o amser



3	30	11
Mis	Munud	Diwrnod
<input type="checkbox"/>	<input checked="" type="checkbox"/>	<input type="checkbox"/>

5 Faint o'r gloch yw hi?



08:10

6 Pa un yw'r ongl sgwâr?



8 $\frac{1}{2} \circ 4 =$ **2**

$\frac{1}{2} \circ 10 =$ **5**

$\frac{1}{2} \circ 6 =$ **3**

9 $\frac{1}{5} \circ 45 =$ **9**

$\frac{1}{10} \circ 30 =$ **3**

$\frac{1}{2} \circ 8 =$ **4**

10 $\frac{2}{4} - \frac{1}{4} =$ **$\frac{1}{4}$**

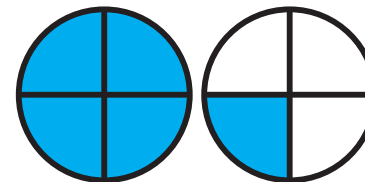
2 < neu >

3L > 2L

1kg < 1700g

20cm < 2m

7 Ysgrifennwch hwn fel rhif cymysg



$1 \frac{1}{4}$

FY SGÔR DDIWETHAF?!

YDW I WEDI EI GURO?!

